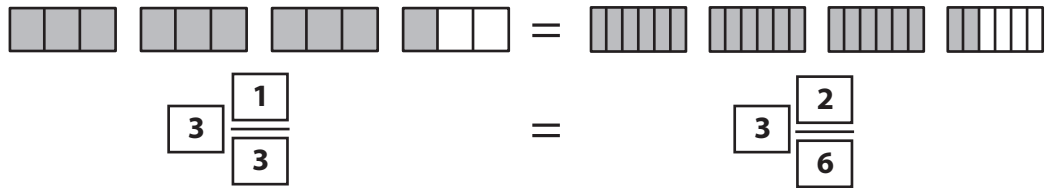


Name : \_\_\_\_\_

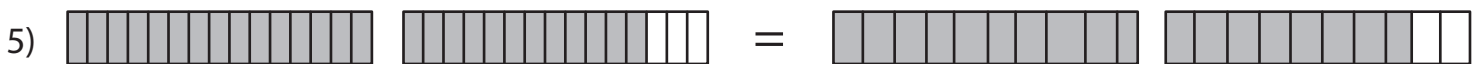
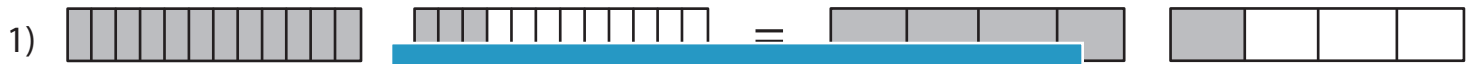
## Equivalent Fractions

Mixed Numbers: S2

Example:



Write the equivalent fraction sentence for each pair of fraction bars.



**PREVIEW**

Gain complete access to the largest collection of worksheets in all subjects!

Members, please log in to download this worksheet.

Not a member? Please sign up to gain complete access.

[www.mathworksheets4kids.com](http://www.mathworksheets4kids.com)

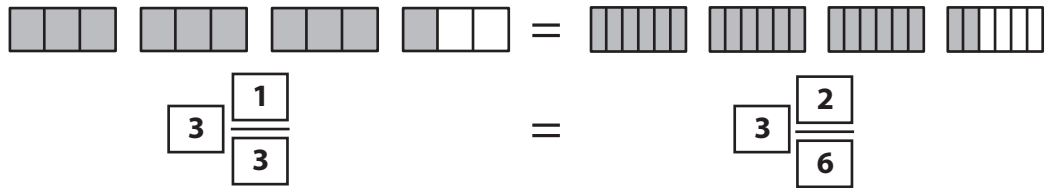
Name : \_\_\_\_\_

## Answer Key

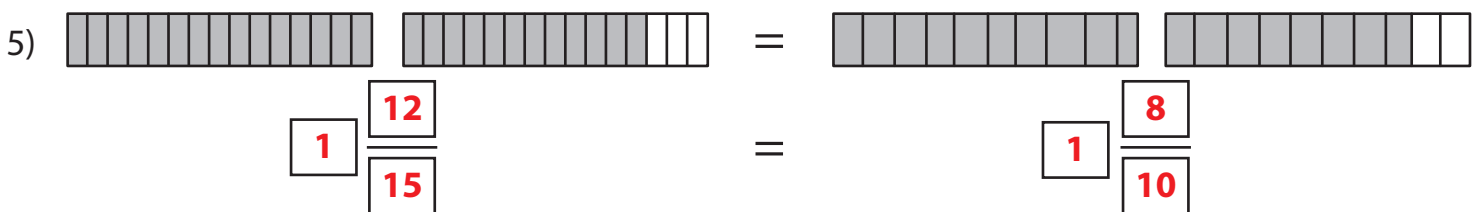

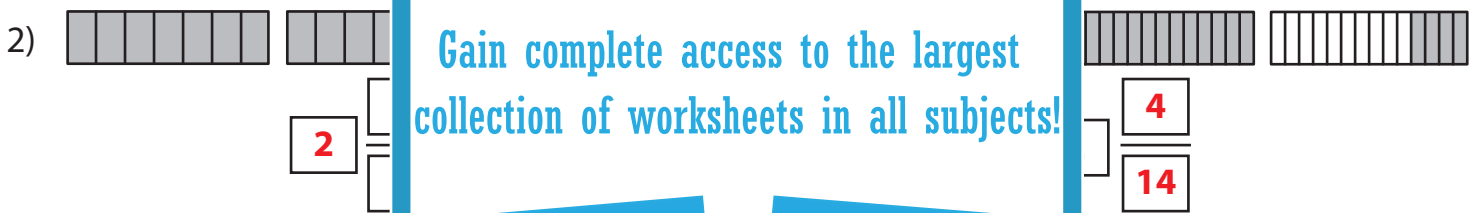
### Equivalent Fractions

Mixed Numbers: S2

Example:



Write the equivalent fraction sentence for each pair of fraction bars.



**PREVIEW**

Gain complete access to the largest collection of worksheets in all subjects!

Members, please log in to download this worksheet.

Not a member? Please sign up to gain complete access.

[www.mathworksheets4kids.com](http://www.mathworksheets4kids.com)