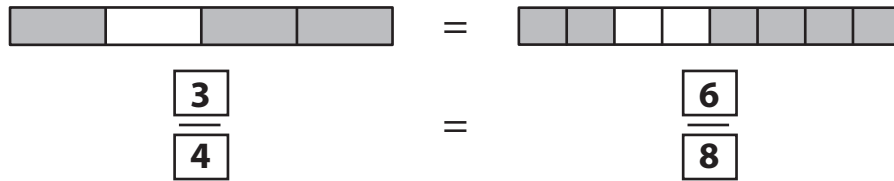


Name : _____

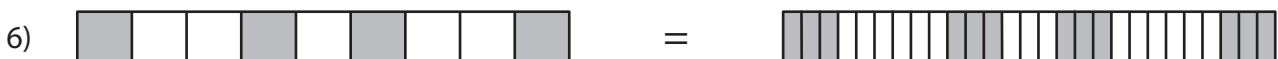
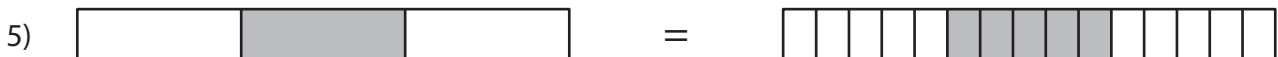

Equivalent Fractions

Proper Fractions: S2

Example:



Write the equivalent fraction sentence for each pair of fraction bars.



PREVIEW

Gain complete access to the largest collection of worksheets in all subjects!

Members, please log in to download this worksheet.

Not a member? Please sign up to gain complete access.

www.mathworksheets4kids.com

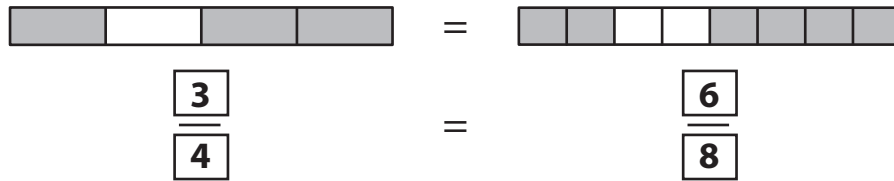
Name : _____

Answer Key


Equivalent Fractions

Proper Fractions: S2

Example:



Write the equivalent fraction sentence for each pair of fraction bars.



$\frac{4}{20}$



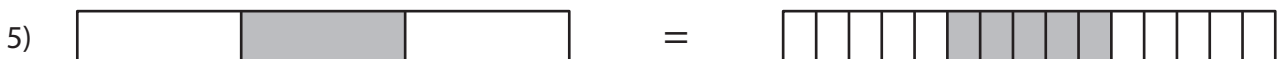
$\frac{6}{27}$



$\frac{8}{14}$

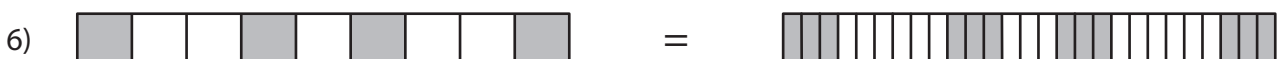


$\frac{10}{12}$



$\frac{1}{3}$

$\frac{5}{15}$



$\frac{4}{9}$

$\frac{12}{27}$

PREVIEW

Gain complete access to the largest collection of worksheets in all subjects!

Members, please log in to download this worksheet.

Not a member? Please sign up to gain complete access.

www.mathworksheets4kids.com