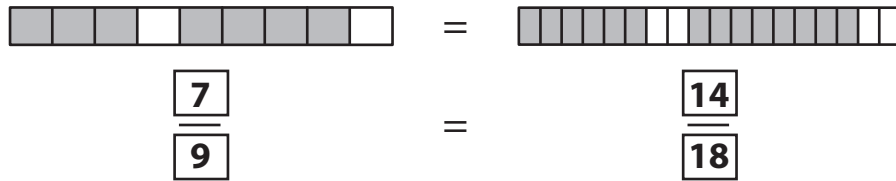


Name : \_\_\_\_\_




## Equivalent Fractions

Proper Fractions: S3

Example:



Write the equivalent fraction sentence for each pair of fraction bars.



**PREVIEW**

Gain complete access to the largest collection of worksheets in all subjects!

Members, please log in to download this worksheet.

Not a member? Please sign up to gain complete access.

[www.mathworksheets4kids.com](http://www.mathworksheets4kids.com)

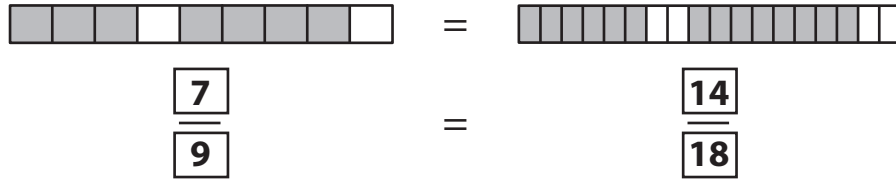
Name : \_\_\_\_\_

## Answer Key


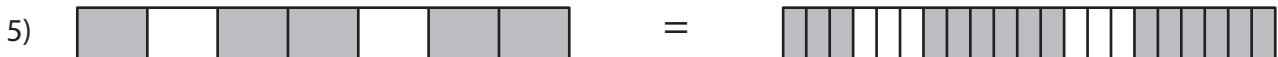

### Equivalent Fractions

Proper Fractions: S3

Example:



Write the equivalent fraction sentence for each pair of fraction bars.



**PREVIEW**

Gain complete access to the largest collection of worksheets in all subjects!

Members, please log in to download this worksheet.

Not a member? Please sign up to gain complete access.

[www.mathworksheets4kids.com](http://www.mathworksheets4kids.com)

$\frac{12}{21}$

$\frac{2}{16}$

$\frac{10}{15}$

$\frac{9}{24}$

$\frac{5}{7}$

$\frac{15}{21}$

$\frac{5}{8}$

$\frac{10}{16}$