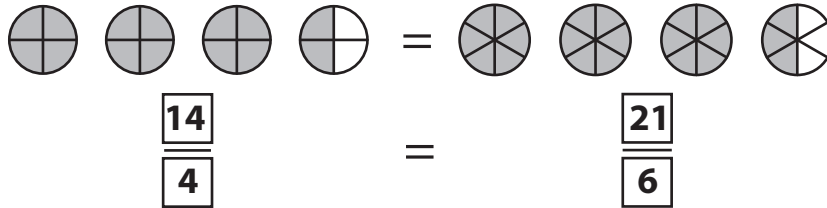


Name : \_\_\_\_\_

# Equivalent Fractions

Improper Fractions: S1

Example:



Observe each pair of pie models and write the equivalent fraction sentence.



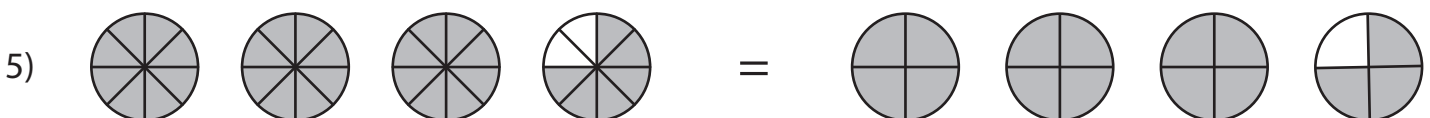

**PREVIEW**

Gain complete access to the largest collection of worksheets in all subjects!

Members, please log in to download this worksheet.

Not a member? Please sign up to gain complete access.

[www.mathworksheets4kids.com](http://www.mathworksheets4kids.com)



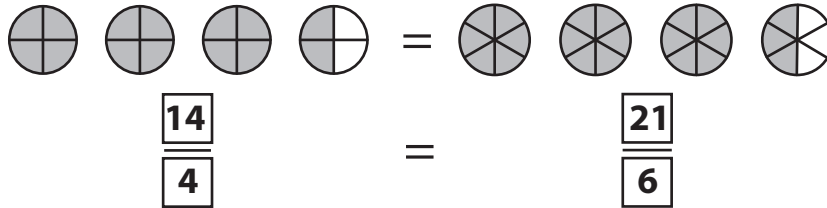
Name : \_\_\_\_\_

## Answer Key

### Equivalent Fractions

Improper Fractions: S1

Example:



Observe each pair of pie models and write the equivalent fraction sentence.



$$\frac{24}{9}$$



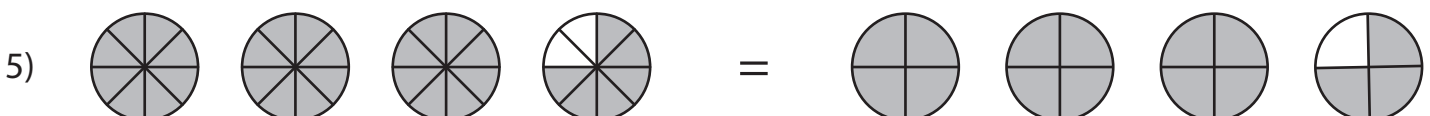
$$\frac{7}{2}$$



$$\frac{45}{15}$$



$$\frac{40}{12} = \frac{20}{6}$$



$$\frac{30}{8} = \frac{15}{4}$$