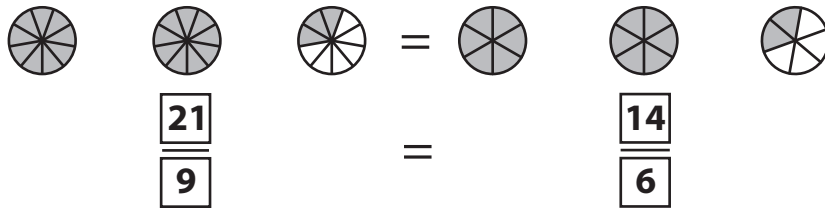


Name : \_\_\_\_\_

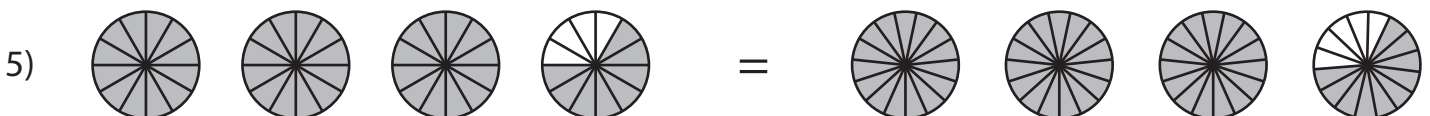
## Equivalent Fractions

Improper Fractions: S3

Example:



Observe each pair of pie models and write the equivalent fraction sentence.



**PREVIEW**

Gain complete access to the largest collection of worksheets in all subjects!

Members, please log in to download this worksheet.

Not a member? Please sign up to gain complete access.

[www.mathworksheets4kids.com](http://www.mathworksheets4kids.com)

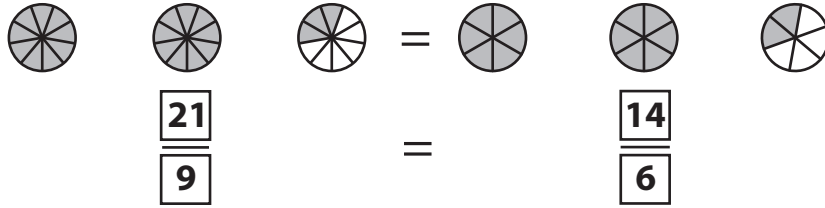
Name : \_\_\_\_\_

## Answer Key

### Equivalent Fractions

Improper Fractions: S3

Example:



Observe each pair of pie models and write the equivalent fraction sentence.



$\frac{7}{9}$

$\frac{7}{2}$



$\frac{2}{3}$

$\frac{6}{9}$



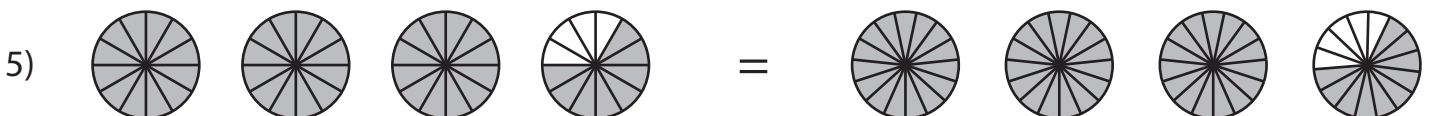
$\frac{7}{10}$

$\frac{7}{5}$



$\frac{3}{4}$

$\frac{6}{9}$



$\frac{44}{10}$

$\frac{55}{10}$