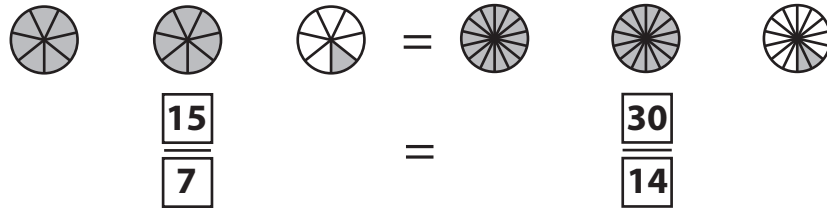


Equivalent Fractions

Example:



Observe each pair of pie models and write the equivalent fraction sentence.




=



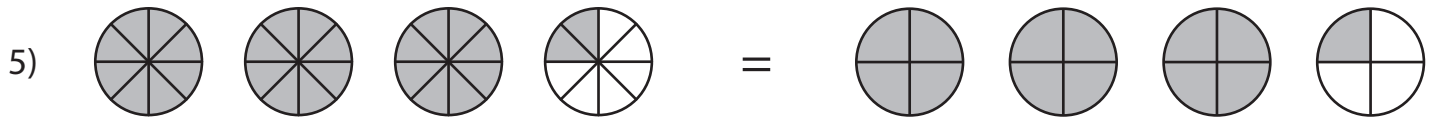
=



=



=



=

PREVIEW

Gain complete access to the largest collection of worksheets in all subjects!

Members, please log in to download this worksheet.

Not a member? Please sign up to gain complete access.

www.mathworksheets4kids.com

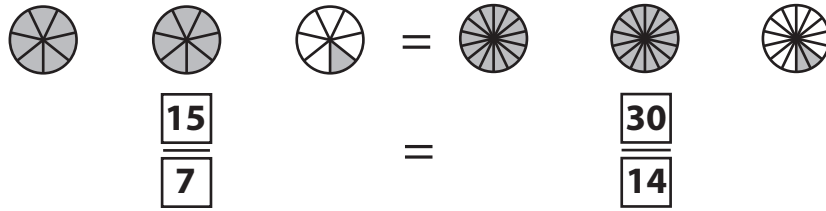
Name : _____

Answer Key

Equivalent Fractions

Improper Fractions: 54

Example:



Observe each pair of pie models and write the equivalent fraction sentence.



$\frac{2}{7}$

$\frac{8}{14}$



$\frac{1}{3}$

$\frac{4}{12}$



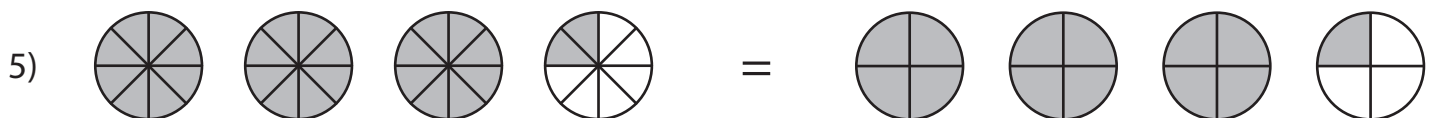
$\frac{1}{5}$

$\frac{3}{15}$



$\frac{2}{7}$

$\frac{4}{14}$



$\frac{13}{8}$

$\frac{13}{4}$

PREVIEW

Gain complete access to the largest collection of worksheets in all subjects!

Members, please log in to download this worksheet.

Not a member? Please sign up to gain complete access.

www.mathworksheets4kids.com