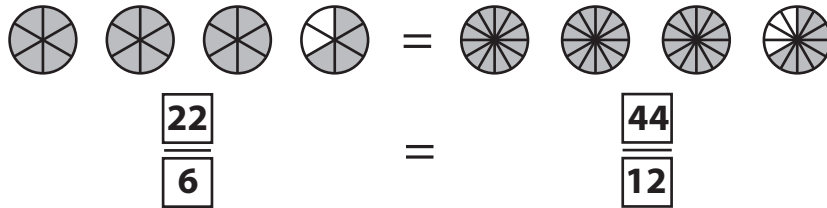


Equivalent Fractions

Example:



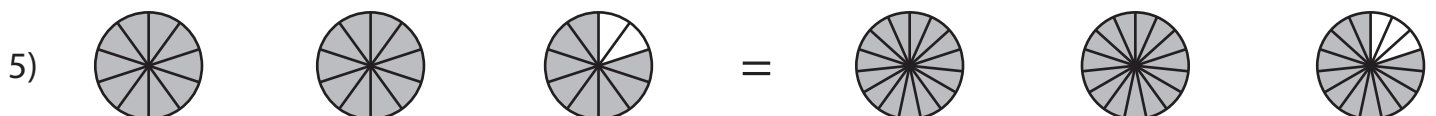
Observe each pair of pie models and write the equivalent fraction sentence.











PREVIEW

Gain complete access to the largest collection of worksheets in all subjects!

Members, please log in to download this worksheet.

Not a member? Please sign up to gain complete access.

www.mathworksheets4kids.com

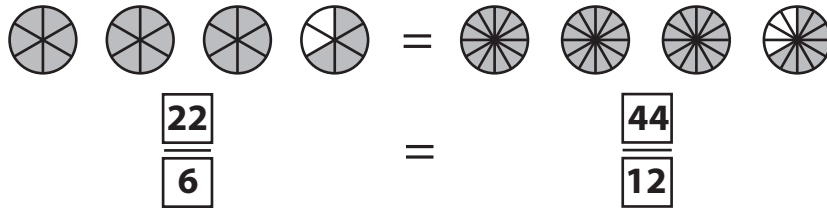
Name : _____

Answer Key

Equivalent Fractions

Improper Fractions: 55

Example:



Observe each pair of pie models and write the equivalent fraction sentence.



$$\frac{12}{4}$$

$$\frac{33}{12}$$



$$\frac{20}{6}$$

$$\frac{30}{9}$$



$$\frac{7}{2}$$

$$\frac{35}{10}$$



$$\frac{24}{12}$$

$$\frac{12}{6}$$



$$\frac{28}{10}$$

$$\frac{42}{15}$$

PREVIEW

Gain complete access to the largest collection of worksheets in all subjects!

Members, please log in to download this worksheet.

Not a member? Please sign up to gain complete access.

www.mathworksheets4kids.com