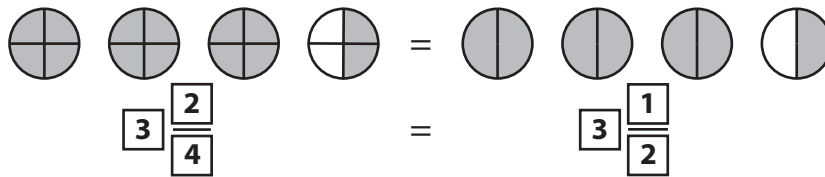


Name : _____

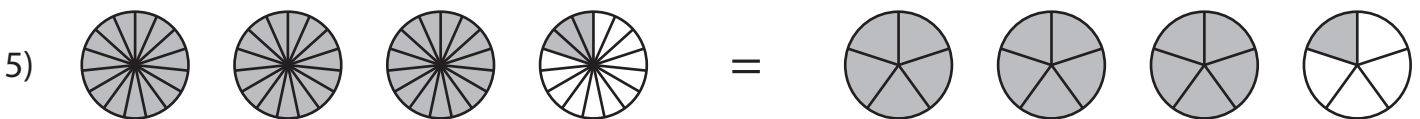
Equivalent Fractions

Mixed Numbers: S1

Example:



Observe each pair of pie models and write the equivalent fraction sentence.



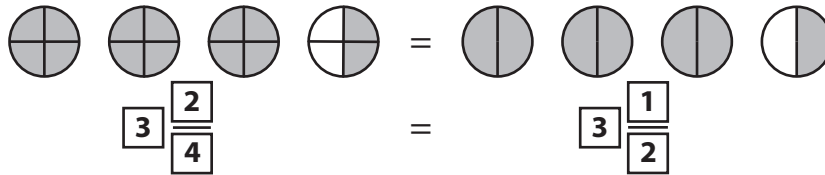
Name : _____

Answer Key

Equivalent Fractions

Mixed Numbers: S1

Example:



Observe each pair of pie models and write the equivalent fraction sentence.



$3 \frac{3}{8} = 3 \frac{1}{4}$



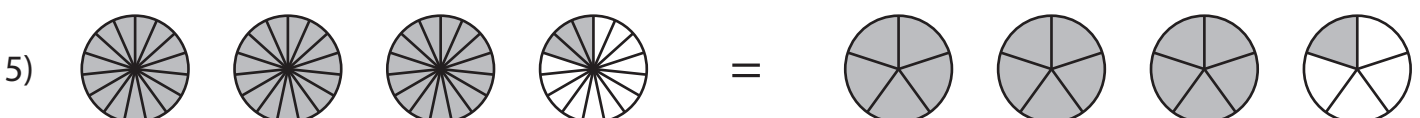
$2 \frac{2}{6} = 2 \frac{2}{12}$



$3 \frac{3}{8} = 3 \frac{1}{2}$



$2 \frac{2}{3} = 2 \frac{6}{9}$



$3 \frac{3}{15} = 3 \frac{1}{5}$