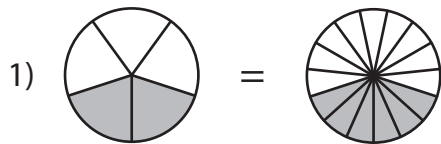


Name : _____

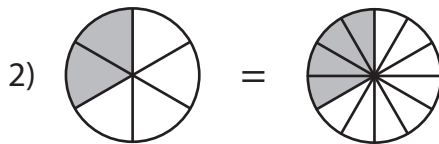
Equivalent Fractions

Proper Fractions: S1

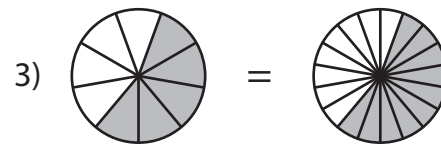
Observe each pair of pie models and write the equivalent fraction sentence.



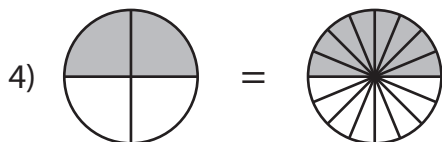
$$\frac{\boxed{2}}{\boxed{5}} = \frac{\boxed{6}}{\boxed{15}}$$



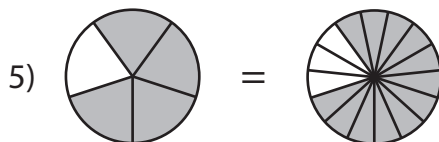
$$\frac{\boxed{}}{\boxed{}} = \frac{\boxed{}}{\boxed{}}$$



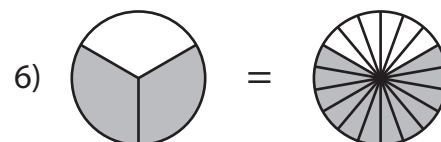
$$\frac{\boxed{}}{\boxed{}} = \frac{\boxed{}}{\boxed{}}$$



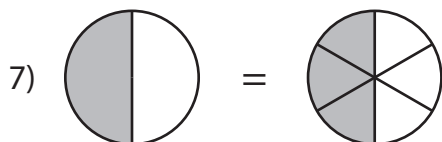
$$\frac{\boxed{}}{\boxed{}} = \frac{\boxed{}}{\boxed{}}$$



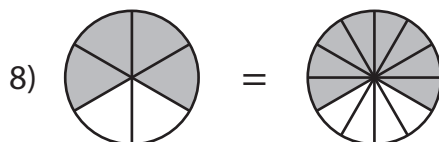
$$\frac{\boxed{}}{\boxed{}} = \frac{\boxed{}}{\boxed{}}$$



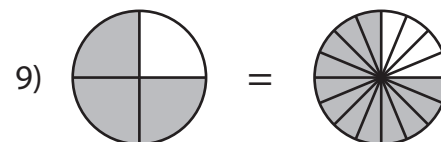
$$\frac{\boxed{}}{\boxed{}} = \frac{\boxed{}}{\boxed{}}$$



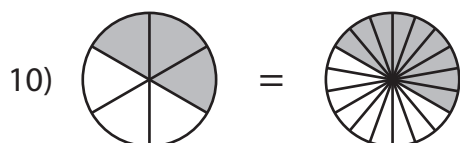
$$\frac{\boxed{}}{\boxed{}} = \frac{\boxed{}}{\boxed{}}$$



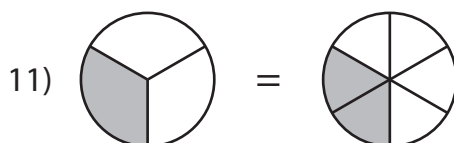
$$\frac{\boxed{}}{\boxed{}} = \frac{\boxed{}}{\boxed{}}$$



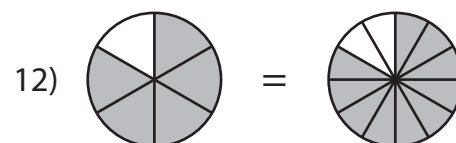
$$\frac{\boxed{}}{\boxed{}} = \frac{\boxed{}}{\boxed{}}$$



$$\frac{\boxed{}}{\boxed{}} = \frac{\boxed{}}{\boxed{}}$$



$$\frac{\boxed{}}{\boxed{}} = \frac{\boxed{}}{\boxed{}}$$



$$\frac{\boxed{}}{\boxed{}} = \frac{\boxed{}}{\boxed{}}$$

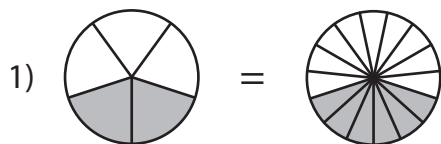
Name : _____

Answer Key

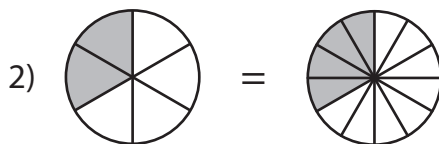
Equivalent Fractions

Proper Fractions: S1

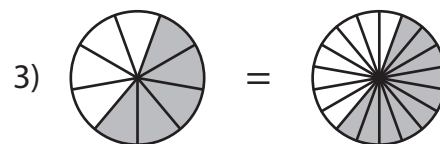
Observe each pair of pie models and write the equivalent fraction sentence.



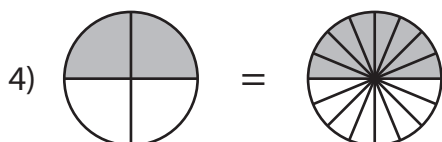
$$\frac{2}{5} = \frac{6}{15}$$



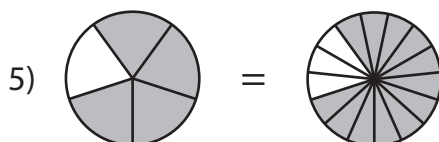
$$\frac{2}{6} = \frac{4}{12}$$



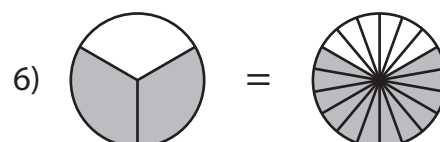
$$\frac{5}{9} = \frac{10}{18}$$



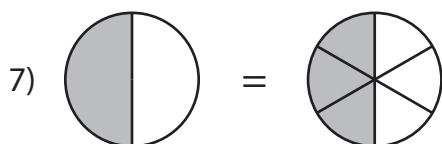
$$\frac{2}{4} = \frac{8}{16}$$



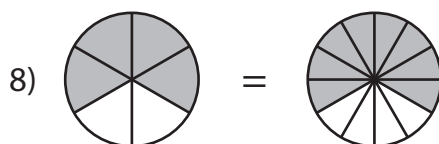
$$\frac{4}{5} = \frac{12}{15}$$



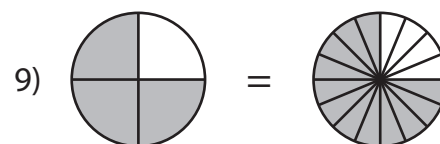
$$\frac{2}{3} = \frac{12}{18}$$



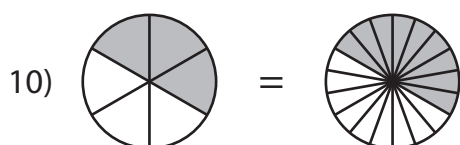
$$\frac{1}{2} = \frac{3}{6}$$



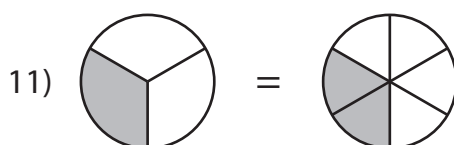
$$\frac{4}{6} = \frac{8}{12}$$



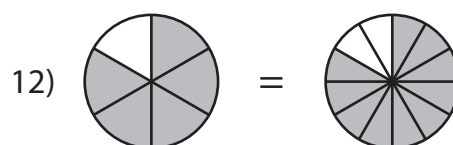
$$\frac{3}{4} = \frac{12}{16}$$



$$\frac{3}{6} = \frac{9}{18}$$



$$\frac{1}{3} = \frac{2}{6}$$



$$\frac{5}{6} = \frac{10}{12}$$