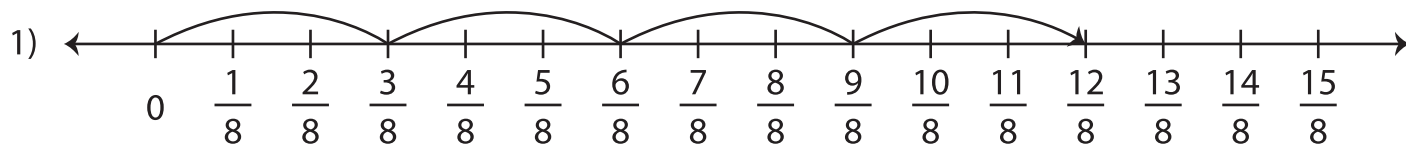
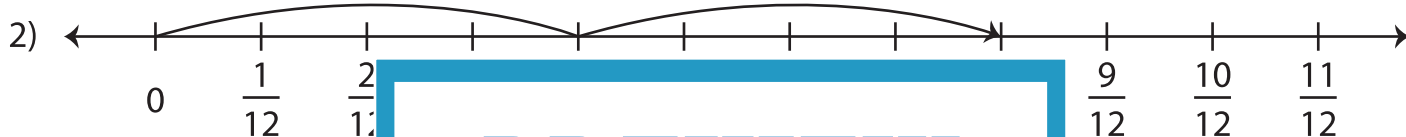


Multiplying Fractions - Number Line


Complete the multiplication equation to represent each number line model.



$$\underline{\quad} \times \frac{3}{8} = \frac{12}{8}$$



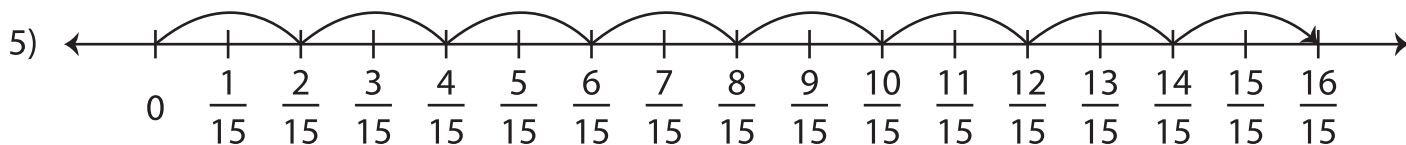
$$2 \times \frac{\quad}{\quad} = \frac{\quad}{\quad}$$



$$3 \times \frac{5}{4} = \frac{\quad}{\quad}$$



$$\underline{\quad} \times \frac{1}{13} = \frac{\quad}{13}$$



$$8 \times \frac{2}{15} = \underline{\quad}$$

PREVIEW

Gain complete access to the largest
collection of worksheets in all subjects!

Members, please
log in to
download this
worksheet.

Not a member?
Please sign up to
gain complete
access.

www.mathworksheets4kids.com