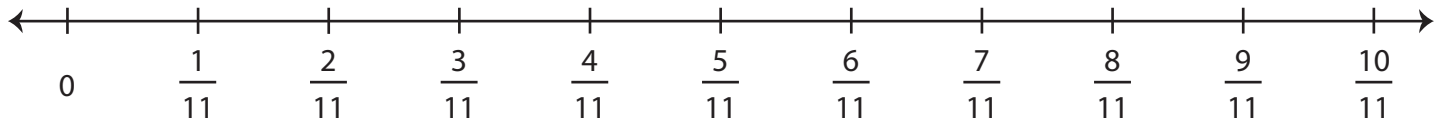


Name: _____

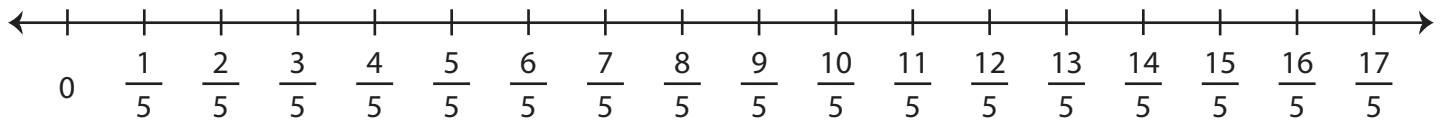
Multiplying Fractions - Number Line

Draw hops on the number line, and complete each multiplication equation.

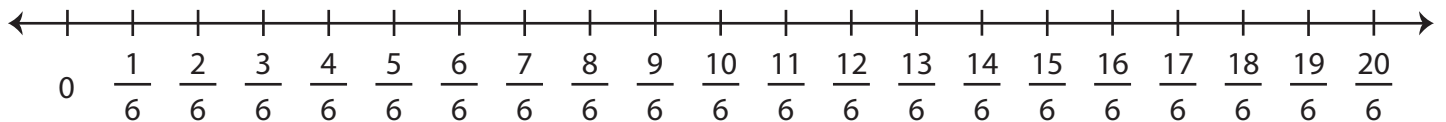
1) $6 \times \frac{1}{11} =$ _____



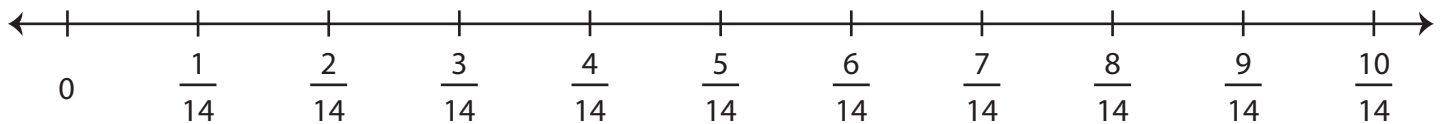
2) $8 \times \frac{2}{5} =$ _____



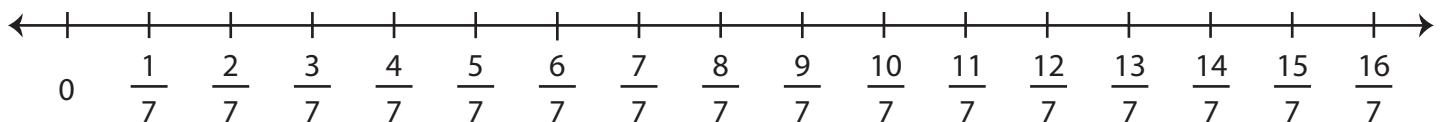
3) $3 \times \frac{5}{6} =$ _____



4) $9 \times \frac{1}{14} =$ _____



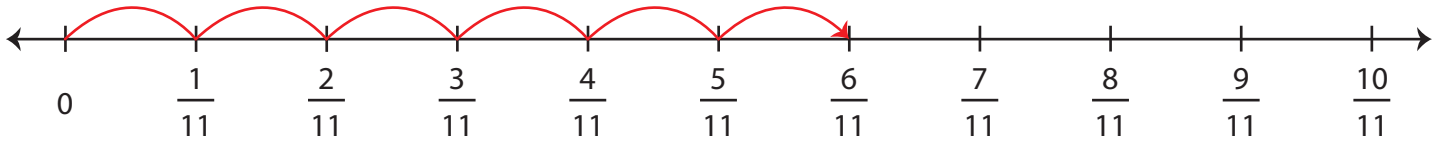
5) $2 \times \frac{8}{7} =$ _____



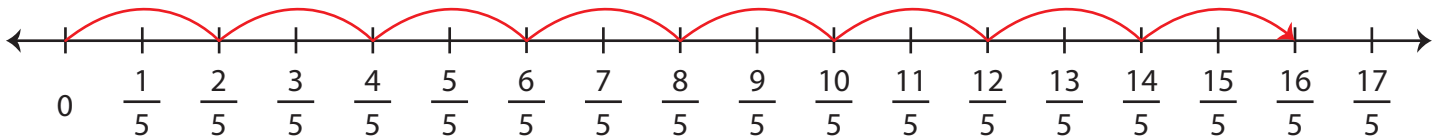
Multiplying Fractions - Number Line

Draw hops on the number line, and complete each multiplication equation.

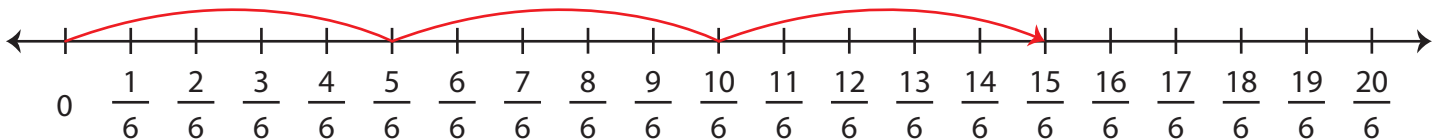
1) $6 \times \frac{1}{11} = \underline{\frac{6}{11}}$



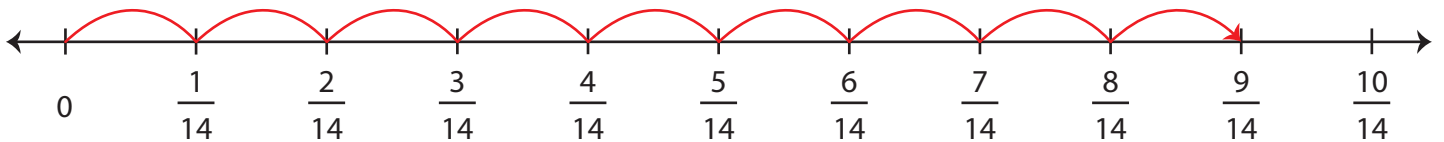
2) $8 \times \frac{2}{5} = \underline{\frac{16}{5}}$



3) $3 \times \frac{5}{6} = \underline{\frac{15}{6}}$



4) $9 \times \frac{1}{14} = \underline{\frac{9}{14}}$



5) $2 \times \frac{8}{7} = \underline{\frac{16}{7}}$

