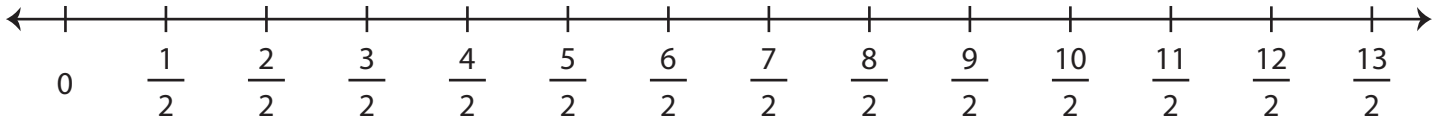


Multiplying Fractions - Number Line

Draw hops on the number line and complete each multiplication equation.

1) $4 \times \frac{3}{2} =$ _____



2) $5 \times \frac{3}{16} =$ _____



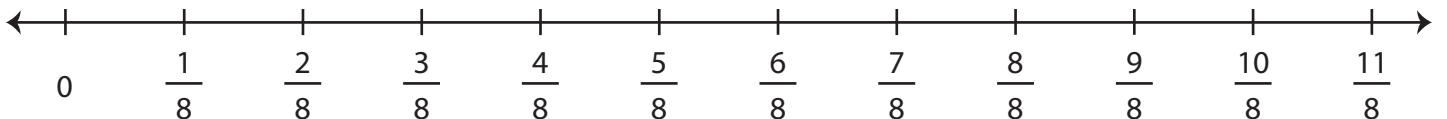
3) $2 \times \frac{5}{4} =$ _____



4) $3 \times \frac{4}{17} =$ _____



5) $10 \times \frac{1}{8} =$ _____



PREVIEW

Gain complete access to the largest
collection of worksheets in all subjects!

Members, please
log in to
download this
worksheet.

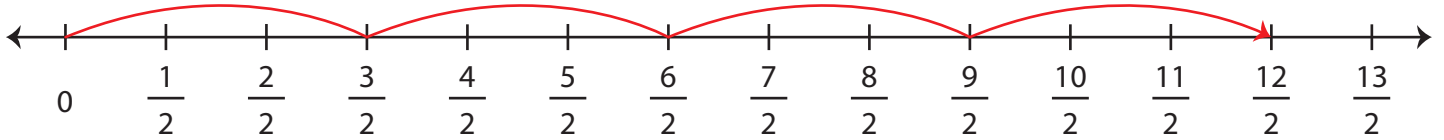
Not a member?
Please sign up to
gain complete
access.

www.mathworksheets4kids.com

Multiplying Fractions - Number Line

Draw hops on the number line and complete each multiplication equation.

1) $4 \times \frac{3}{2} = \underline{\frac{12}{2}}$



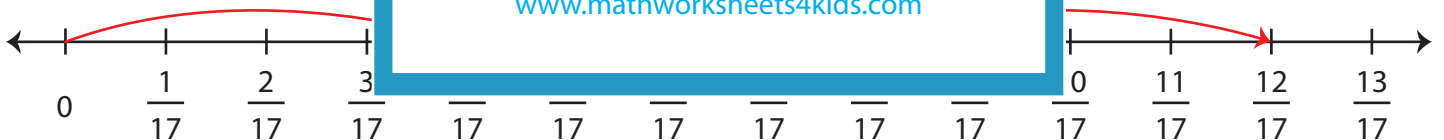
2) $5 \times \frac{3}{16} = \underline{\frac{15}{16}}$



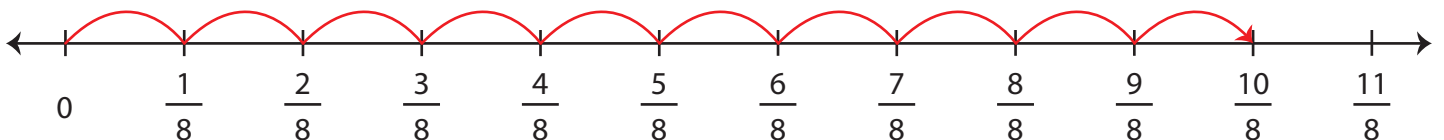
3) $2 \times \frac{5}{4} = \underline{\hspace{2cm}}$



4) $3 \times \frac{4}{17} = \underline{\hspace{2cm}}$



5) $10 \times \frac{1}{8} = \underline{\frac{10}{8}}$



PREVIEW

Gain complete access to the largest collection of worksheets in all subjects!

Members, please log in to download this worksheet.

Not a member? Please sign up to gain complete access.

www.mathworksheets4kids.com