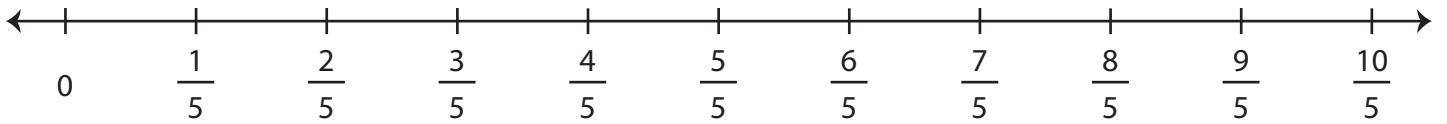


Multiplying Fractions - Number Line

Draw hops on the number line and complete each multiplication equation.

1) $2 \times \frac{3}{5} =$ _____



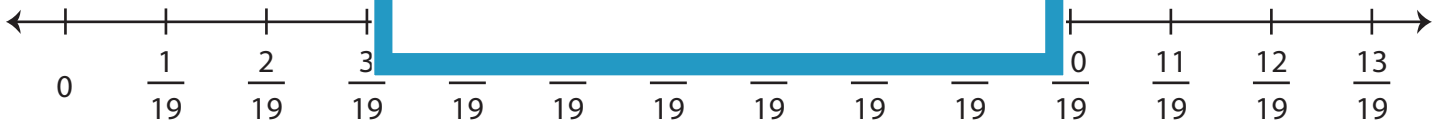
2) $4 \times \frac{4}{3} =$ _____



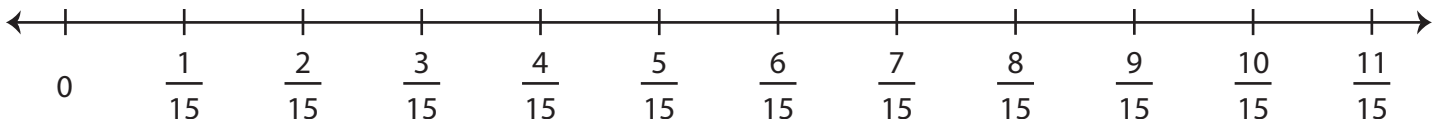
3) $6 \times \frac{3}{10} =$ _____



4) $5 \times \frac{2}{19} =$ _____



5) $7 \times \frac{1}{15} =$ _____



PREVIEW

Gain complete access to the largest
collection of worksheets in all subjects!

Members, please
log in to
download this
worksheet.

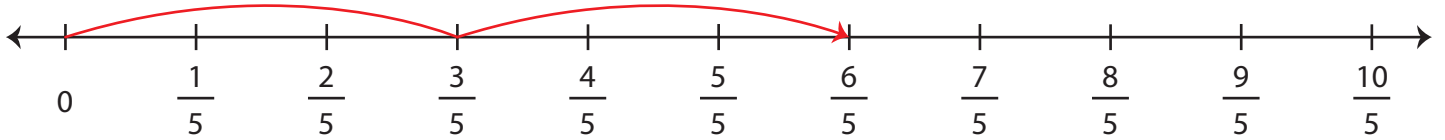
Not a member?
Please sign up to
gain complete
access.

www.mathworksheets4kids.com

Multiplying Fractions - Number Line

Draw hops on the number line and complete each multiplication equation.

1) $2 \times \frac{3}{5} = \underline{\frac{6}{5}}$



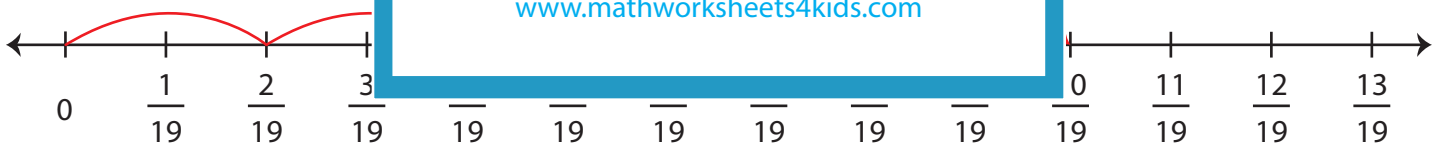
2) $4 \times \frac{4}{3} = \underline{\frac{16}{3}}$



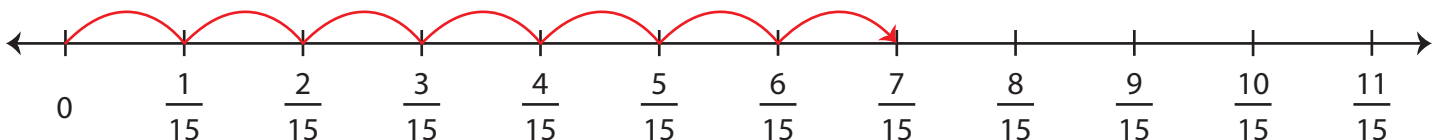
3) $6 \times \frac{3}{10} = \underline{\hspace{2cm}}$



4) $5 \times \frac{2}{19} = \underline{\hspace{2cm}}$



5) $7 \times \frac{1}{15} = \underline{\frac{7}{15}}$



PREVIEW

Gain complete access to the largest collection of worksheets in all subjects!

Members, please log in to download this worksheet.

Not a member? Please sign up to gain complete access.

www.mathworksheets4kids.com