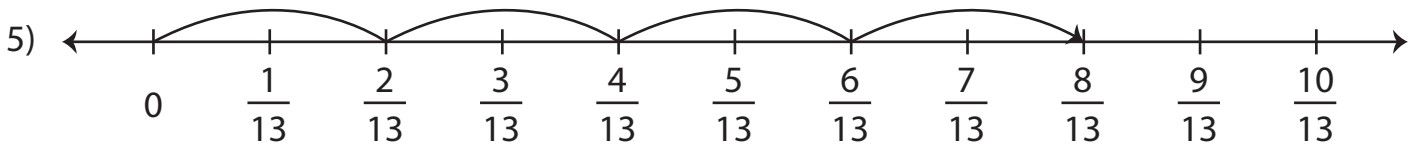
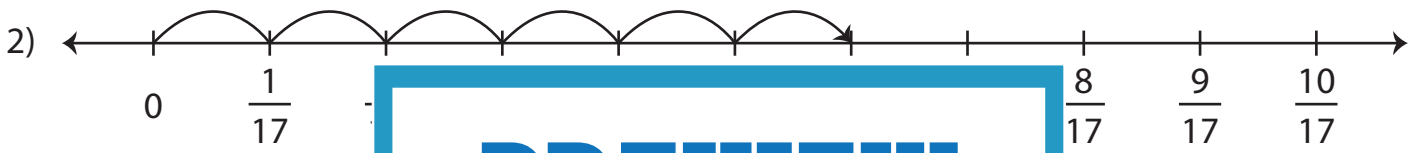
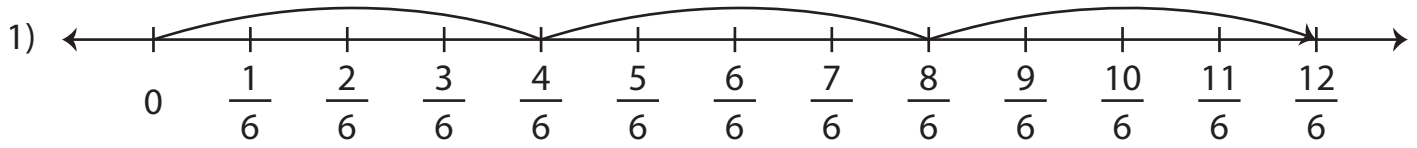


Name: _____

Multiplying Fractions - Number Line

Write a multiplication equation to represent each number line model.



PREVIEW

Gain complete access to the largest collection of worksheets in all subjects!

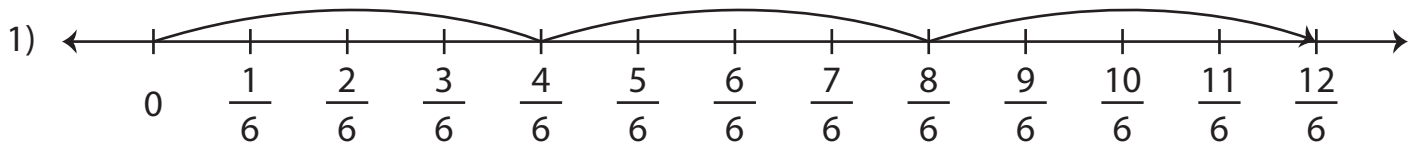
Members, please log in to download this worksheet.

Not a member? Please sign up to gain complete access.

www.mathworksheets4kids.com

Multiplying Fractions - Number Line

Write a multiplication equation to represent each number line model.



$$3 \times \frac{4}{6} = \frac{12}{6}$$



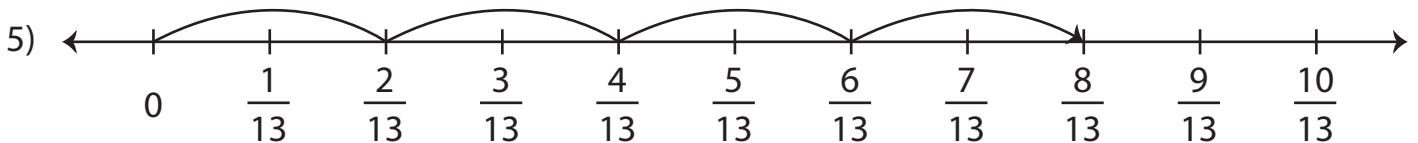
$$6 \times \frac{1}{17} = \frac{6}{17}$$



$$2 \times \frac{6}{8} = \frac{12}{8}$$



$$5 \times \frac{3}{11} = \frac{15}{11}$$



$$4 \times \frac{2}{13} = \frac{8}{13}$$

PREVIEW

Gain complete access to the largest collection of worksheets in all subjects!

Members, please log in to download this worksheet.

Not a member? Please sign up to gain complete access.

www.mathworksheets4kids.com