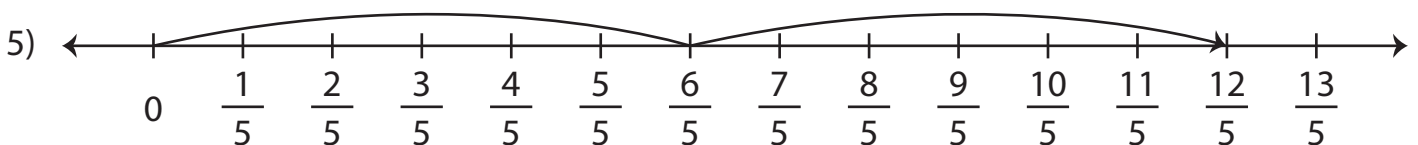
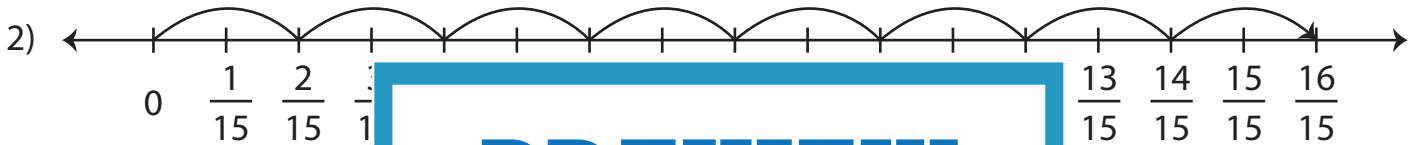
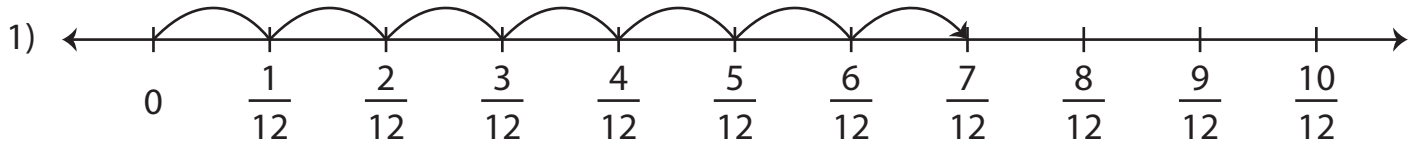


## Multiplying Fractions - Number Line

Write a multiplication equation to represent each number line model.



# PREVIEW

Gain complete access to the largest  
collection of worksheets in all subjects!

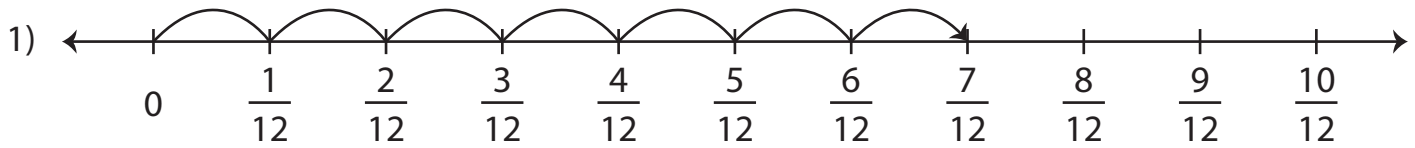
Members, please  
log in to  
download this  
worksheet.

Not a member?  
Please sign up to  
gain complete  
access.

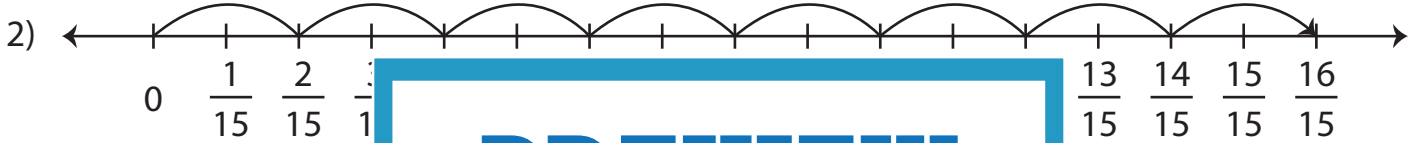
[www.mathworksheets4kids.com](http://www.mathworksheets4kids.com)

## Multiplying Fractions - Number Line

Write a multiplication equation to represent each number line model.



$$7 \times \frac{1}{12} = \frac{7}{12}$$



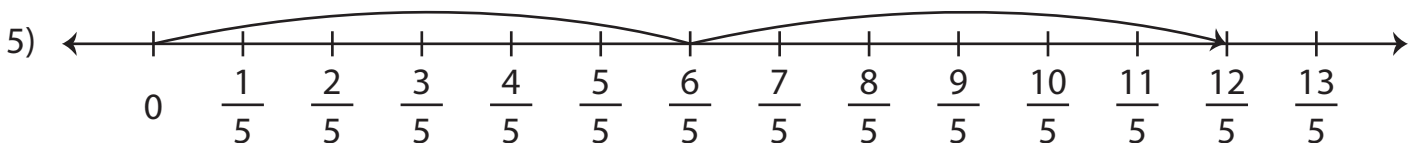
$$8 \times \frac{2}{15} = \frac{16}{15}$$



$$6 \times \frac{3}{7} = \frac{18}{7}$$



$$3 \times \frac{5}{9} = \frac{15}{9}$$



$$2 \times \frac{6}{5} = \frac{12}{5}$$

# PREVIEW

Gain complete access to the largest  
collection of worksheets in all subjects!

Members, please  
log in to  
download this  
worksheet.

Not a member?  
Please sign up to  
gain complete  
access.

[www.mathworksheets4kids.com](http://www.mathworksheets4kids.com)