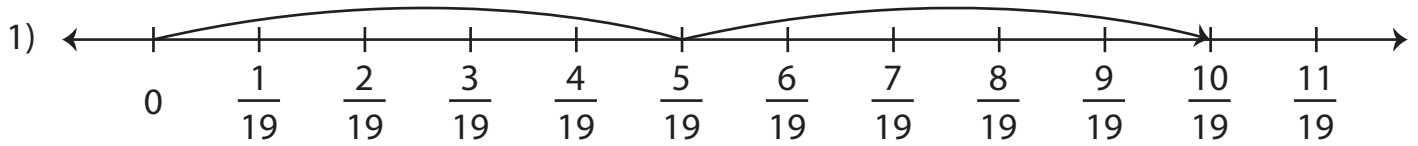
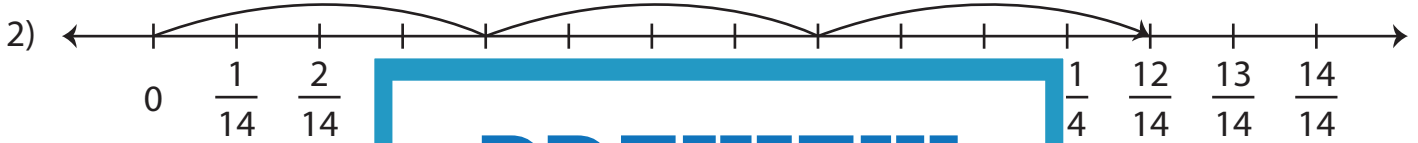


Multiplying Fractions - Number Line

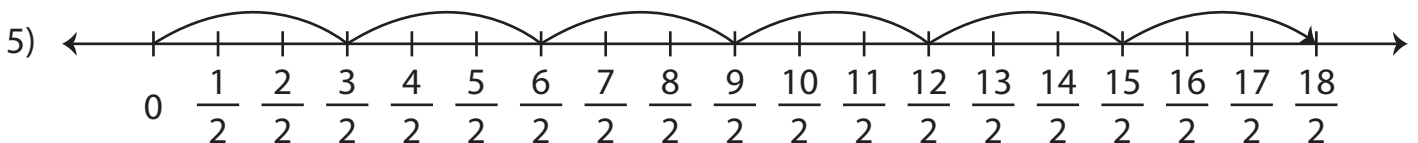
Write a multiplication equation to represent each number line model.











PREVIEW

Gain complete access to the largest
collection of worksheets in all subjects!

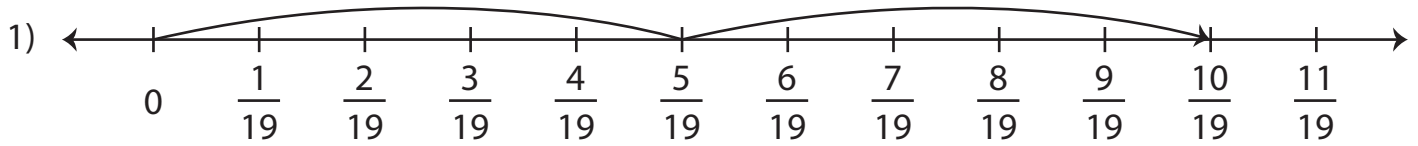
Members, please
log in to
download this
worksheet.

Not a member?
Please sign up to
gain complete
access.

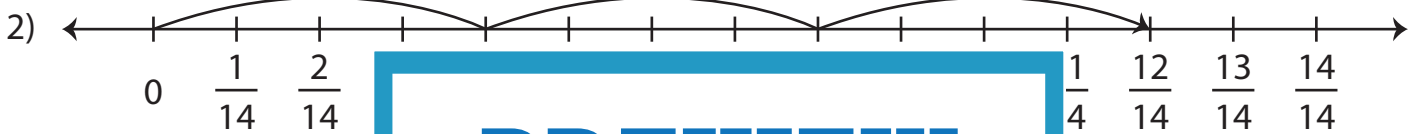
www.mathworksheets4kids.com

Multiplying Fractions - Number Line

Write a multiplication equation to represent each number line model.



$$2 \times \frac{5}{19} = \frac{10}{19}$$



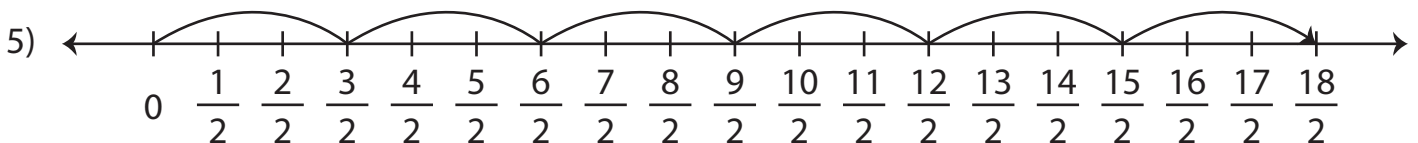
$$3 \times \frac{4}{14} = \frac{12}{14}$$



$$5 \times \frac{2}{4} = \frac{10}{4}$$



$$7 \times \frac{1}{10} = \frac{7}{10}$$



$$6 \times \frac{3}{2} = \frac{18}{2}$$

PREVIEW

Gain complete access to the largest
collection of worksheets in all subjects!

Members, please
log in to
download this
worksheet.

Not a member?
Please sign up to
gain complete
access.

www.mathworksheets4kids.com