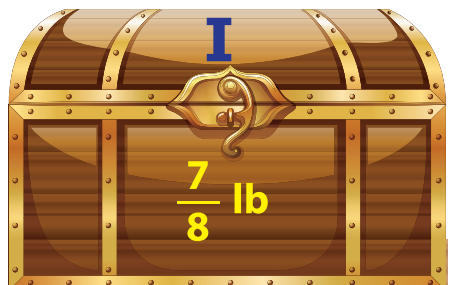


Name : _____

Ordering Fractions - Riddles

Arrange the treasure chests in the increasing order of their weights. Indicate the progression from lightest to heaviest using letters mentioned on the chests. Find what precious stone you find as treasure.



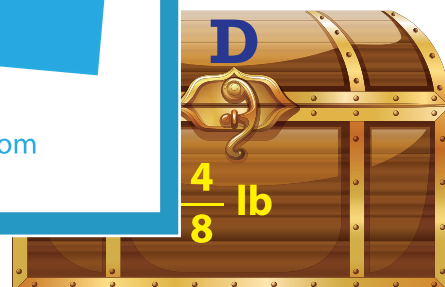
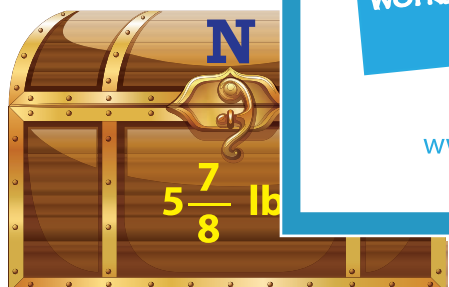
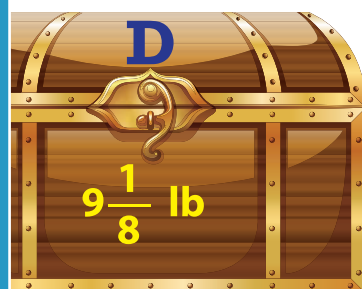
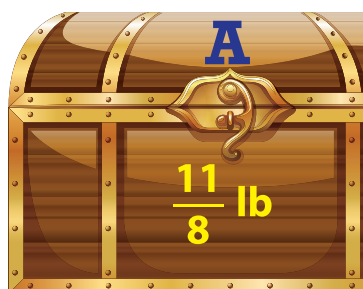
PREVIEW

Gain complete access to the largest collection of worksheets in all subjects!

Members, please log in to download this worksheet.

Not a member? Please sign up to gain complete access.

www.mathworksheets4kids.com



--	--	--	--	--	--	--

I found a _____ .