

Name: \_\_\_\_\_

# Ordering Fractions - Cut and Glue Activity

Cut the pizzas and glue them in the correct order. Write the fractions in increasing order and decreasing order.


Smallest				Largest
----------	--	--	--	---------

Increasing Order: \_\_\_\_\_


Decreasing Order: \_\_\_\_\_




$$\frac{4}{8}$$




$$\frac{9}{11}$$




$$\frac{2}{3}$$



$$\frac{6}{7}$$



$$\frac{2}{8}$$








Name: \_\_\_\_\_

**Answer Key**

**Ordering Fractions - Cut and Glue Activity**

Sheet 1

Cut the pizzas and glue them in the correct order. Write the fractions in increasing order and decreasing order.

$\frac{2}{8}$ 	$\frac{4}{8}$ 	$\frac{2}{3}$ 	$\frac{9}{11}$ 	$\frac{6}{7}$ 
--	--	--	---	--

Increasing Order: \_\_\_\_\_

$\frac{2}{8}, \frac{4}{8}, \frac{2}{3}, \frac{9}{11}, \frac{6}{7}$

Decreasing Order: \_\_\_\_\_

$\frac{6}{7}, \frac{9}{11}, \frac{2}{3}, \frac{4}{8}, \frac{2}{8}$