


Ordering Fractions - Riddles

Arrange the pumpkins in the increasing order of their weights. Indicate the order from lightest to heaviest using letters mentioned on the pumpkin leaves. Find out what a pumpkin's favorite sport is.



PREVIEW

Gain complete access to the largest collection of worksheets in all subjects!

Members, please log in to download this worksheet.

Not a member? Please sign up to gain complete access.

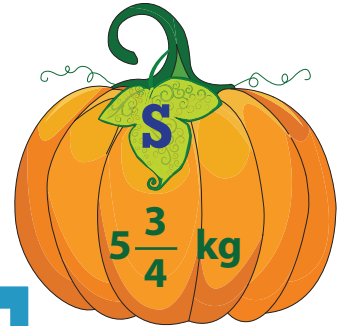
www.mathworksheets4kids.com

--	--	--	--	--	--

A pumpkin's favorite sport is _____ .

Ordering Fractions - Riddles

Arrange the pumpkins in the increasing order of their weights. Indicate the order from lightest to heaviest using letters mentioned on the pumpkin leaves. Find out what a pumpkin's favorite sport is.




PREVIEW

Gain complete access to the largest collection of worksheets in all subjects!

Members, please log in to download this worksheet.

Not a member? Please sign up to gain complete access.

www.mathworksheets4kids.com



$$5 \frac{3}{4} \text{ kg}$$

$$19 \frac{3}{3} \text{ kg}$$

$$6 \frac{5}{9} \text{ kg}$$

$$7 \frac{1}{6} \text{ kg}$$

$$\frac{15}{2} \text{ kg}$$

$$7 \frac{6}{7} \text{ kg}$$

A pumpkin's favorite sport is **SQUASH** .