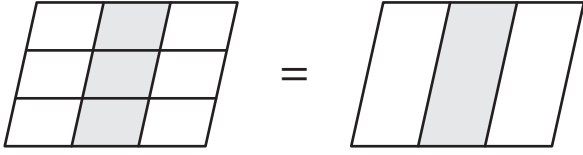


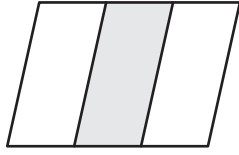
Simplifying Fractions Using Models

Simplify each fraction using the given models.

1)

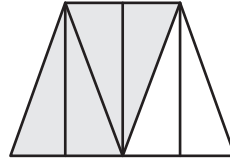


=

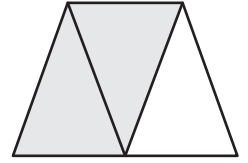


$$\frac{3}{9} = \frac{\square}{\square}$$

2)



=



$$= \frac{\square}{\square}$$

PREVIEW


Gain complete access to the largest collection of worksheets in all subjects!

Members, please log in to download this worksheet.

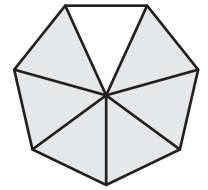
Not a member? Please sign up to gain complete access.

www.mathworksheets4kids.com

3)



=

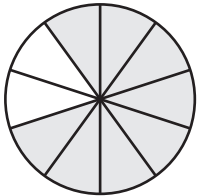


$$\frac{6}{12} = \frac{\square}{\square}$$

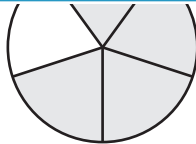
=

$$= \frac{\square}{\square}$$

5)



=

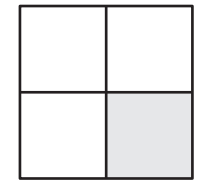


$$\frac{8}{10} = \frac{\square}{\square}$$

=



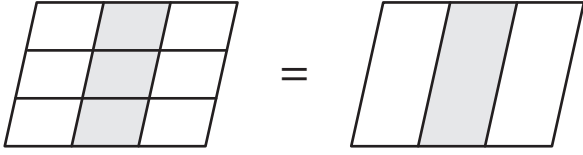
$$\frac{2}{8} = \frac{\square}{\square}$$



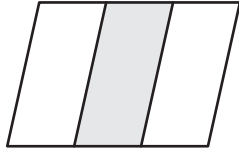
Simplifying Fractions Using Models

Simplify each fraction using the given models.

1)



=

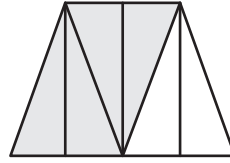


$$\frac{3}{9}$$

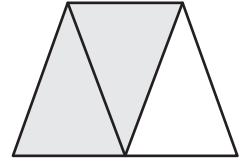
=

1

2)



=




=

2

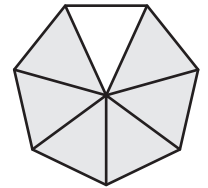
3

3)



=

=



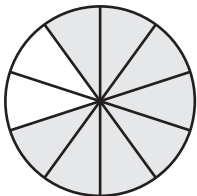
$$\frac{6}{12}$$

=

6

7

5)




=



=



=



$$\frac{8}{10}$$

=

4

5

$$\frac{2}{8}$$

=

1

4

PREVIEW

Gain complete access to the largest collection of worksheets in all subjects!

Members, please log in to download this worksheet.

Not a member? Please sign up to gain complete access.

www.mathworksheets4kids.com