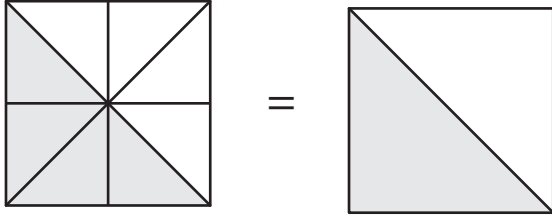


Simplifying Fractions Using Models

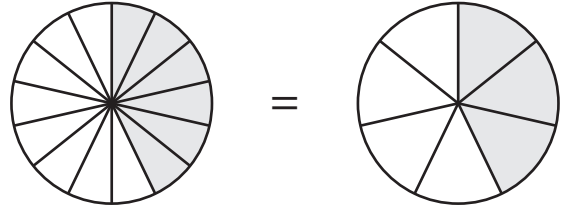
Simplify each fraction using the given models.

1)



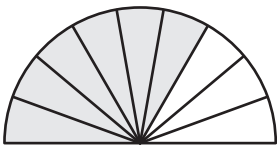
$$\frac{4}{8}$$

2)

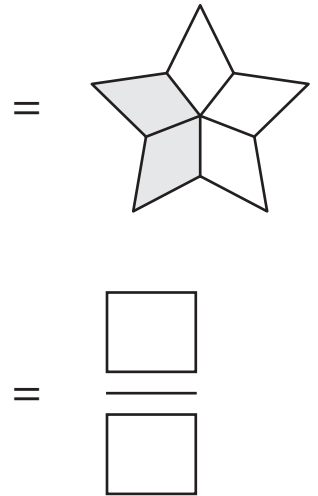


$$\frac{\square}{\square}$$

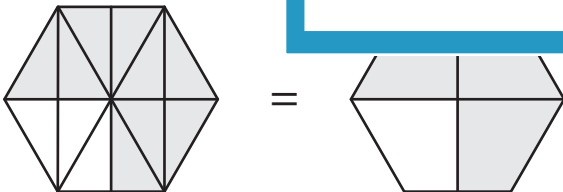
3)



$$\frac{6}{9}$$



5)



$$\frac{9}{12} = \frac{\square}{\square}$$



$$\frac{3}{6} = \frac{\square}{\square}$$

PREVIEW

Gain complete access to the largest collection of worksheets in all subjects!

Members, please log in to download this worksheet.

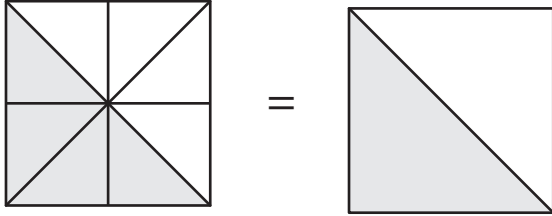
Not a member? Please sign up to gain complete access.

www.mathworksheets4kids.com

Simplifying Fractions Using Models

Simplify each fraction using the given models.

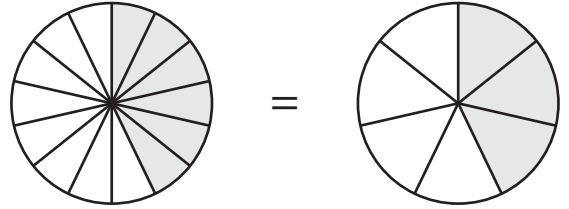
1)



$$\frac{4}{8}$$

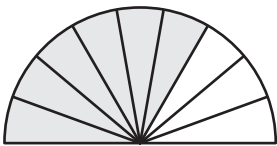
1

2)



$$\frac{3}{7}$$

3)



$$\frac{6}{9}$$

Gain complete access to the largest collection of worksheets in all subjects!

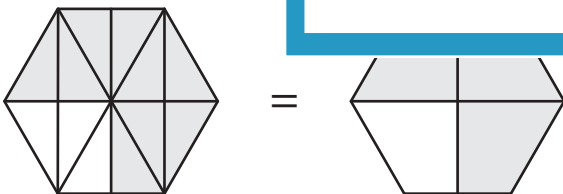
Members, please log in to download this worksheet.

Not a member? Please sign up to gain complete access.

www.mathworksheets4kids.com

$$\frac{2}{5}$$

5)



$$\frac{9}{12} = \frac{3}{4}$$



$$\frac{3}{6} = \frac{1}{2}$$