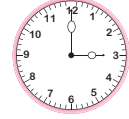



- 1) Fiona spent 50 minutes to complete her homework. She spent 30 minutes on her math assignment and 20 minutes on her science assignment. What fraction of time did Fiona spend on her math assignment?



\_\_\_\_\_

- 2) Sandy empties 21 cookies into a jar. Twelve were vanilla-flavored and 9 were chocolate-flavored. What fraction of cookies were vanilla- flavored?



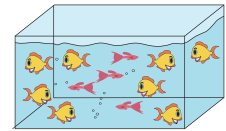
\_\_\_\_\_

- 3) Beth cuts a green apple into 8 slices. She gives 3 slices to her friend, Eva. What fraction of the apple did she give to Eva?



\_\_\_\_\_

- 4) Lily was gifted 10 goldfish at a pet store. She kept 8 goldfish and 4 goldfish were given to her brother. What fraction of the goldfish were given to her brother?



\_\_\_\_\_

- 5) Twenty-one out of thirty people were invited to a party. Six invitees could not make it. What fraction of the invitees could not make it?



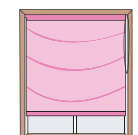
\_\_\_\_\_

- 6) Hal visited the museum for an entry ticket and \$12 on lunch. What fraction of money did Hal spend on the entry ticket?



\_\_\_\_\_

- 7) Christie buys 7 yards of fabric to stitch up curtains for her home. Three yards of fabric has prints on it and 4 yards are plain. What fraction of fabric has prints on it?



\_\_\_\_\_

# PREVIEW

Gain complete access to the largest collection of worksheets in all subjects!

Members, please  
log in to  
download this  
worksheet.

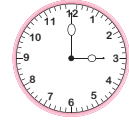
Not a member?  
Please sign up to  
gain complete  
access.

www.mathworksheets4kids.com

**Fraction**


- 1) Fiona spent 50 minutes to complete her homework. She spent 30 minutes on her math assignment and 20 minutes on her science assignment. What fraction of time did Fiona spend on her math assignment?

$\frac{3}{5}$  th of the total time



- 2) Sandy empties 21 cookies into a jar. Twelve were vanilla-flavored and 9 were chocolate-flavored. What fraction of cookies were vanilla- flavored?

$\frac{4}{7}$  th of the total



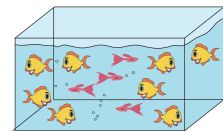
- 3) Beth cuts a green apple into 6 equal slices. She eats 2 slices and gives 1 slice to her sister, Eva. What fraction of the apple did she eat?

$\frac{1}{6}$  th of the apple




- 4) Lily was gifted 12 goldfish from her friend's aquarium. She received 8 goldfish and 4 goldfish from her grandparents.

$\frac{1}{3}$  rd of the total



- 5) Twenty-one out of thirty people were invited to a party. Six invitees could not make it. What fraction of the invitees could not make it?

$\frac{7}{9}$  th of the total



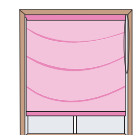
- 6) Hal visited the museum for an entry ticket and spent \$12 on lunch. What fraction of money did Hal spend on the entry ticket?

$\frac{2}{5}$  th of the money



- 7) Christie buys 7 yards of fabric to stitch up curtains for her home. Three yards of fabric has prints on it and 4 yards are plain. What fraction of fabric has prints on it?

$\frac{3}{7}$  th of the fabric



**PREVIEW**

Gain complete access to the largest collection of worksheets in all subjects!

Members, please log in to download this worksheet.

Not a member? Please sign up to gain complete access.

[www.mathworksheets4kids.com](http://www.mathworksheets4kids.com)