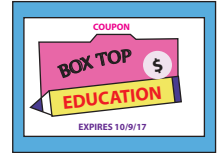


Name : \_\_\_\_\_

## Fraction

T251

- 1) Stephen collected 36 boxtop coupons in total. He gave 18 of them to his sister. What fraction of boxtop coupons did Stephen finally hand over to his teacher?



\_\_\_\_\_

- 2) A cardiologist had 19 appointments fixed for Tuesday. Five appointments were cancelled that morning. What fraction of patients kept their appointments with the doctor on Tuesday?



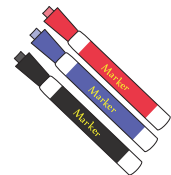
\_\_\_\_\_

- 3) Paula baked two batches of chocolate chip cookies. She used 3 cups of flour for the first batch of cookies and 2 cups for the second batch. What fraction of flour was used to make the first batch of cookies?



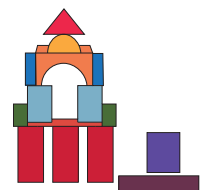
\_\_\_\_\_

- 4) Mr. Hobbs has 11 blue markers, 5 black markers, and 7 red markers on his desk. What fraction of black markers can be found on Mr. Hobbs' desk?



\_\_\_\_\_

- 5) There is a total of 52 building blocks in a bag. Sean uses 38 blocks to build a house. What fraction of building blocks remain unused?



\_\_\_\_\_

Name : \_\_\_\_\_

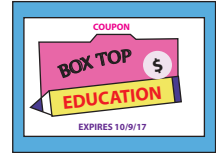
## Answer Key

### Fraction

T2S1

- 1) Stephen collected 36 boxtop coupons in total. He gave 18 of them to his sister. What fraction of boxtop coupons did Stephen finally hand over to his teacher?

$\frac{1}{2}$  the boxtop coupons



- 2) A cardiologist had 19 appointments fixed for Tuesday. Five appointments were cancelled that morning. What fraction of patients kept their appointments with the doctor on Tuesday?

$\frac{14}{19}$  of the patients



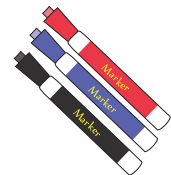
- 3) Paula baked two batches of chocolate chip cookies. She used 3 cups of flour for the first batch of cookies and 2 cups for the second batch. What fraction of flour was used to make the first batch of cookies?

$\frac{3}{5}$  of the total flour



- 4) Mr. Hobbs has 11 blue markers, 5 black markers, and 7 red markers on his desk. What fraction of black markers can be found on Mr. Hobbs' desk?

$\frac{5}{23}$  of the markers



- 5) There is a total of 52 building blocks in a bag. Sean uses 38 blocks to build a house. What fraction of building blocks remain unused?

$\frac{7}{26}$  of the building blocks

