


Name : _____

Fraction

T2S2

- 1) Mrs. Graham placed 6 red, 8 yellow, and 7 white roses in a vase. What fraction of roses are yellow?



- 2) A local community bank has 31 employees on its rolls. Fifteen employees work part-time at the bank. How many employees work full-time in the bank?

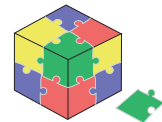


- 3) David was gifted a puzzle with 20 pieces. He has 11 pieces of the puzzle. What fraction of the puzzle does he have?


Gain complete access to the largest collection of worksheets in all subjects!

Members, please log in to download this worksheet.

Not a member? Please sign up to gain complete access.



- 4) Twenty girls were at a dance. Fifteen girls wore red outfits. What fraction of girls wore red outfits at a dance?




- 5) A section of Tina's bookshelf has 15 French books and 6 Spanish books. What fraction of books on the shelf are in Spanish?



Fraction

- 1) Mrs. Graham placed 6 red, 8 yellow, and 7 white roses in a vase. What fraction of roses are yellow?



$\frac{8}{21}$ of the roses

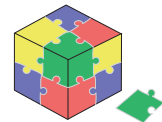
- 2) A local community bank has 31 employees on its rolls. Fifteen employees work part-time at the bank and 16 employees work full-time. What fraction of employees work full-time in the bank?

$\frac{16}{31}$ of the




- 3) David was gifted a 28-piece puzzle. He has already put together 9 pieces of the puzzle. What fraction of the puzzle has he put together?

$\frac{9}{28}$ of the



- 4) Twenty girls were at a dance. Three girls wore red outfits. What fraction of the girls wore red outfits at a dance?

$\frac{1}{3}$ rd of the girls



- 5) A section of Tina's bookshelf has 15 French books and 6 Spanish books. What fraction of books on the shelf are in Spanish?

$\frac{2}{7}$ th of the books



PREVIEW

Gain complete access to the largest collection of worksheets in all subjects!

Members, please log in to download this worksheet.

Not a member? Please sign up to gain complete access.

www.mathworksheets4kids.com