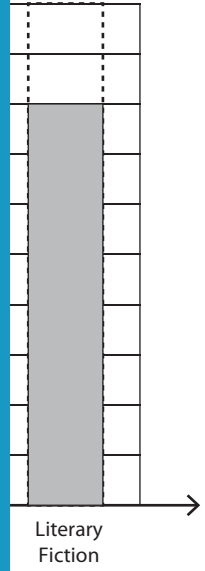



# Percent Bar Graphs

A) A well-known book publishing company conducted a survey among its authors to determine their favorite book genres. Create a percent bar graph to represent the relative frequency of each genre.

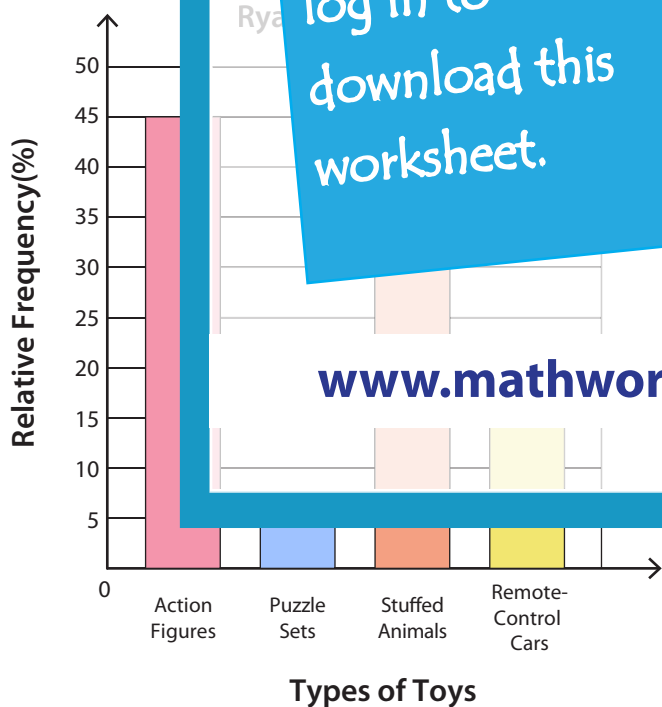
Genre	Number of Authors / Frequency	Relative Frequency (%)
Fantasy	1	
Science Fiction	10	
Historical Fiction		
Literary Fiction		



PREVIEW

Gain complete access to the largest collection of worksheets in all subjects!

B) The percent bar graph carefully and answer the questions.



Members, please log in to download this worksheet.

Not a member? Please sign up to gain complete access.

www.mathworksheets4kids.com

- 1) How many more action figures are there than remote-control cars?  
\_\_\_\_\_
- 2) How many more stuffed animals are there than puzzle sets?  
\_\_\_\_\_