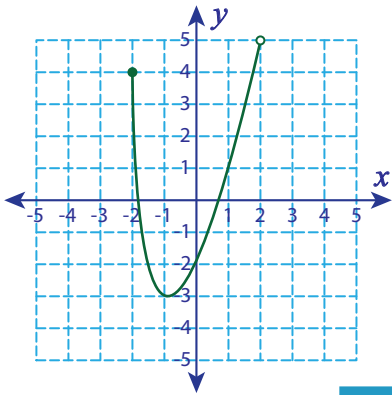


Domain and Range

ES2

Find the domain and range for each graph.

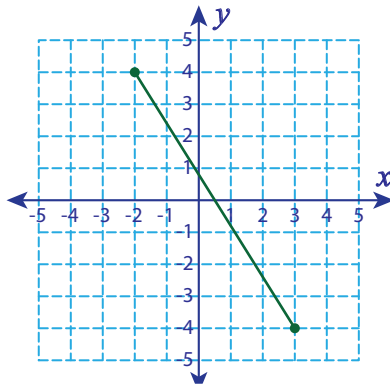
1)



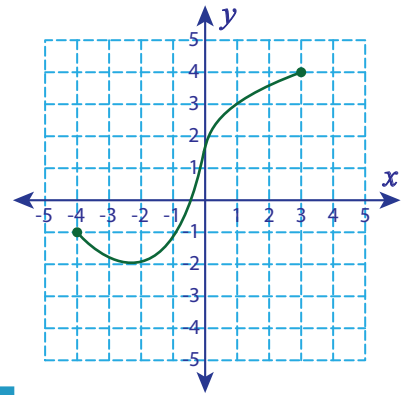
Domain : _____

Range : _____

2)



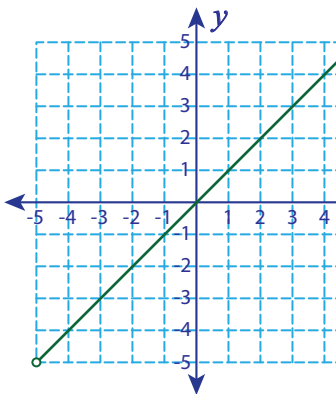
3)



Domain : _____

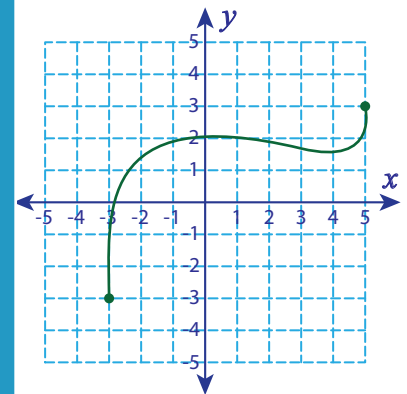
Range : _____

4)



Domain : _____

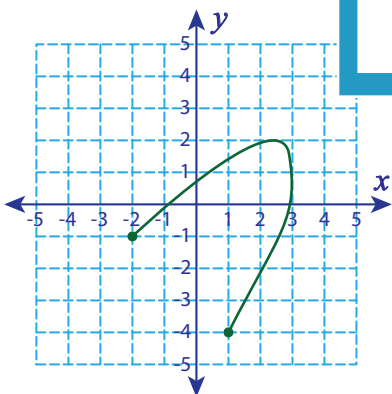
Range : _____



Domain : _____

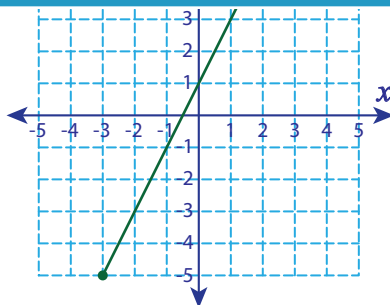
Range : _____

7)



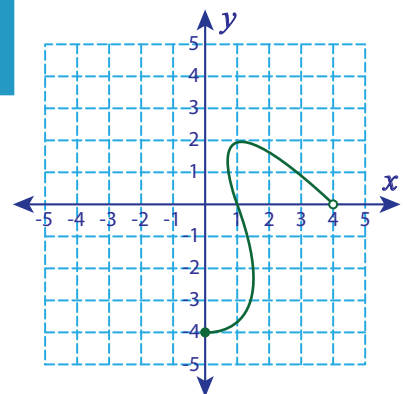
Domain : _____

Range : _____



Domain : _____

Range : _____



Domain : _____

Range : _____

PREVIEW

Access the largest collection of worksheets for just **\$19.95** per year!

Members, please
log in to
download this
worksheet.

Log in

Not a member?
Please sign up to
gain complete
access.

Sign up

www.mathworksheets4kids.com

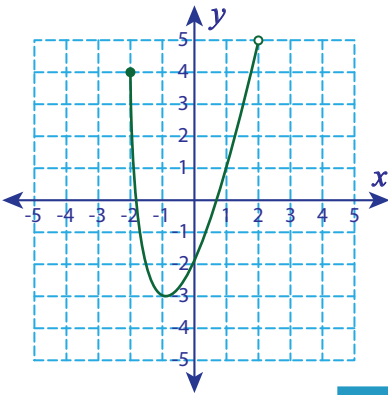
Answer key

Domain and Range

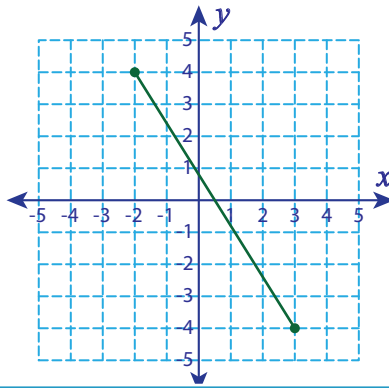
ES2

Find the domain and range for each graph.

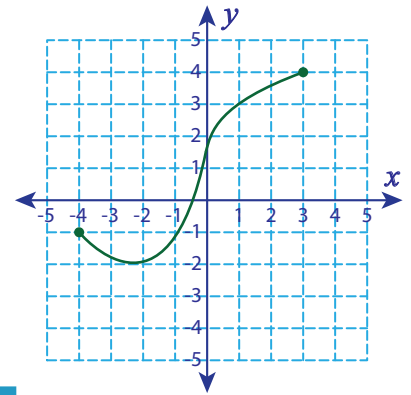
1)

Domain : [-2, 2)Range : [-3, 5)

2)



3)

Domain : [-4, 3]Range : [-2, 4]

PREVIEW

Access the largest collection of worksheets for just **\$19.95** per year!

Members, please log in to download this worksheet.

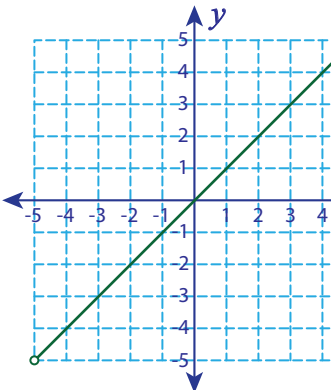
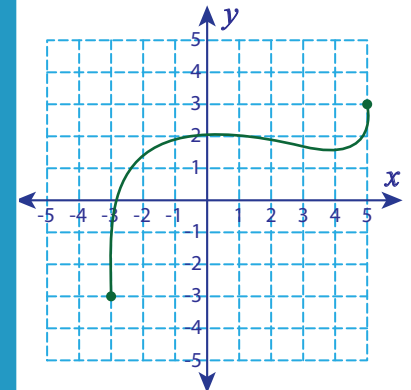
Log in

Not a member? Please sign up to gain complete access.

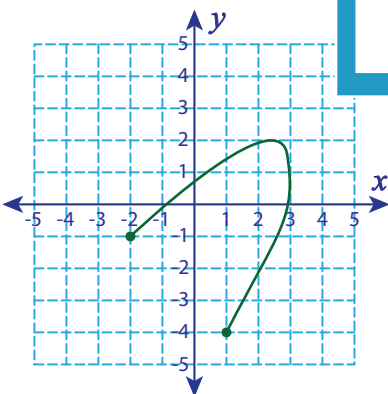
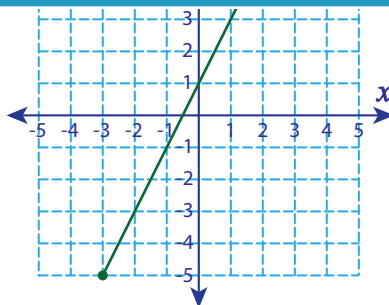
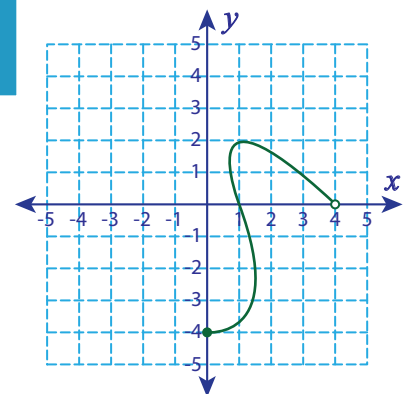
Sign up

www.mathworksheets4kids.com

4)

Domain : (-5, 5)Range : (-5, 5)Domain : [-3, 5]Range : [-3, 3]

7)

Domain : [-2, 3]Range : [-4, 2]Domain : [-3, 2]Range : [-5, 5]Domain : [0, 4)Range : [-4, 2]