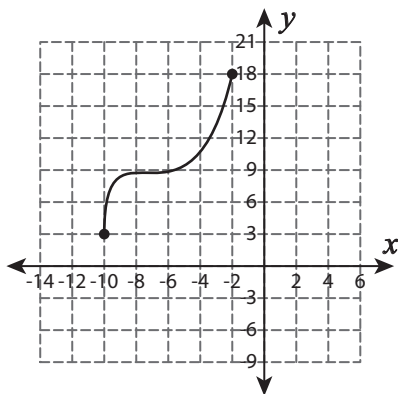


Domain and Range - Graph

Find the domain and range of each graph.

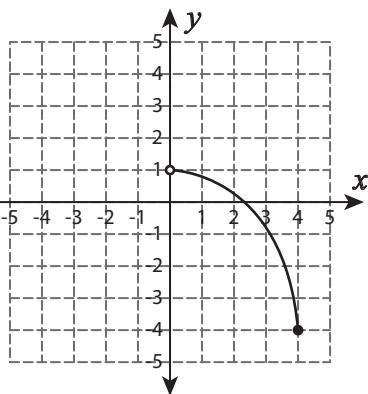
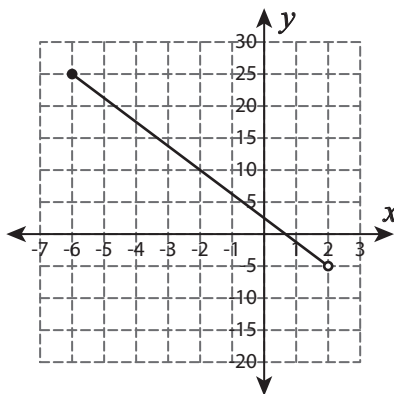
1)



Domain : _____

Range : _____

2)

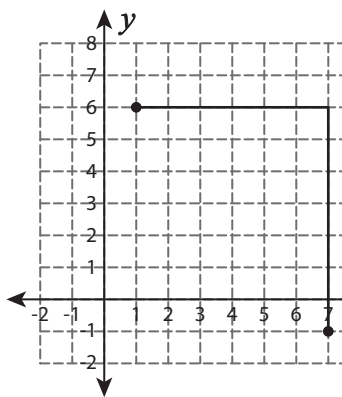


3)

Domain : _____

Range : _____

4)



Domain : _____

Range : _____

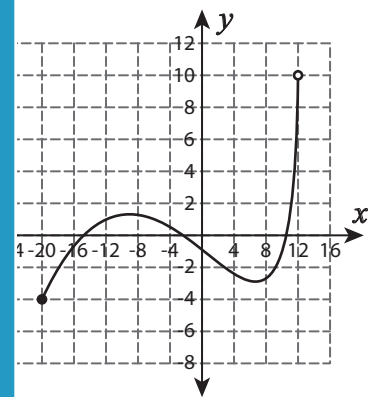
PREVIEW

Gain complete access to the largest collection of worksheets in all subjects!

Members, please log in to download this worksheet.

Not a member? Please sign up to gain complete access.

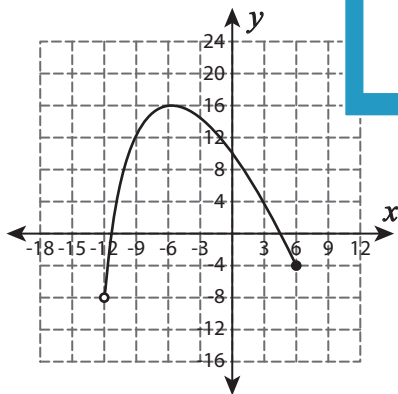
www.mathworksheets4kids.com



Domain : _____

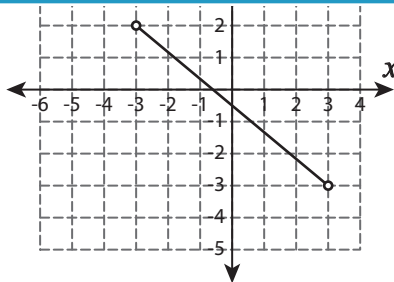
Range : _____

7)



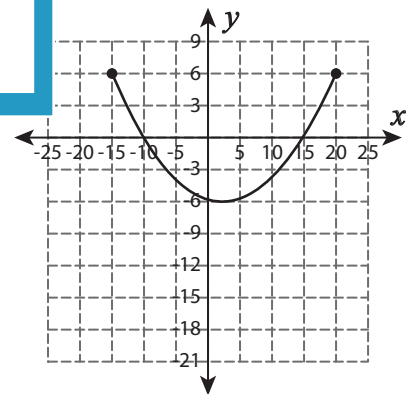
Domain : _____

Range : _____



Domain : _____

Range : _____



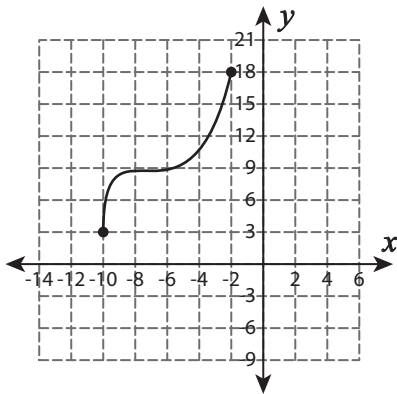
Domain : _____

Range : _____

Domain and Range - Graph

Find the domain and range of each graph.

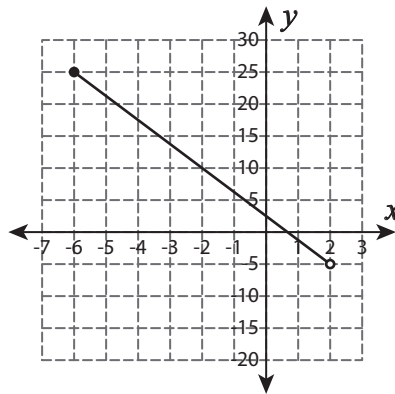
1)



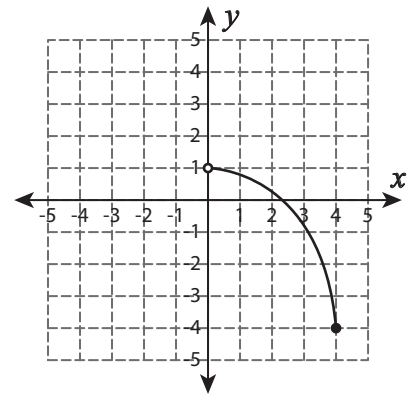
Domain : [-10, -2]

Range : [3, 18]

2)



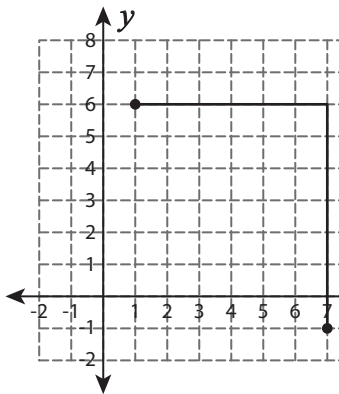
3)



Domain : (0, 4]

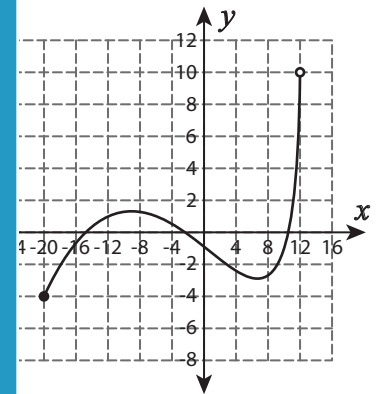
Range : [-4, 1)

4)



Domain : [1, 7]

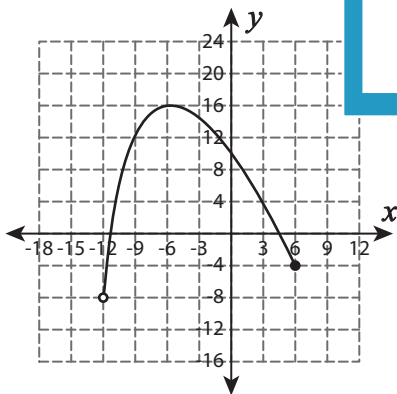
Range : [-1, 6]



Domain : [-20, 12)

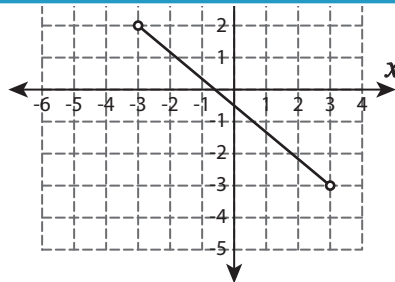
Range : [-4, 10)

7)



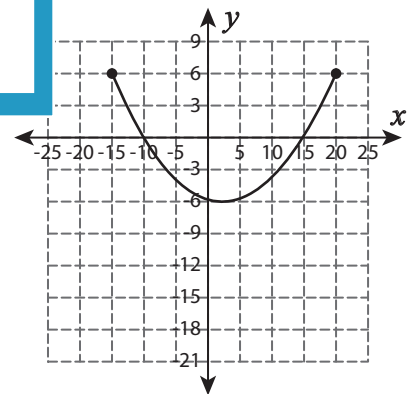
Domain : (-12, 6]

Range : (-8, 16]



Domain : (-3, 3]

Range : (-3, 2)



Domain : [-15, 20]

Range : [-6, 6]

PREVIEW

Gain complete access to the largest collection of worksheets in all subjects!

Members, please log in to download this worksheet.

Not a member? Please sign up to gain complete access.

www.mathworksheets4kids.com