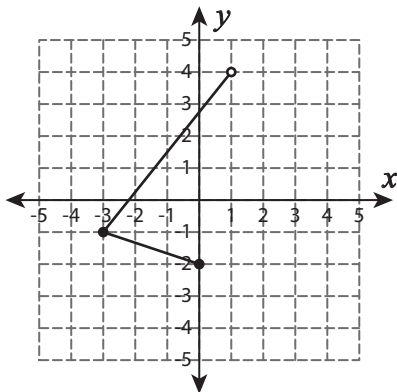


Domain and Range - Graph

Find the domain and range of each graph.

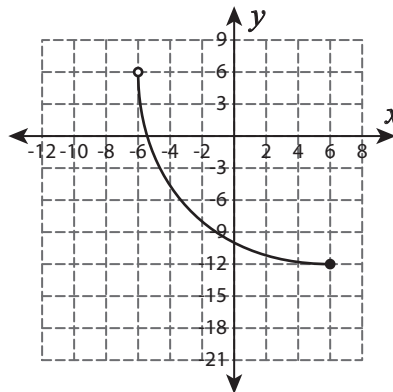
1)



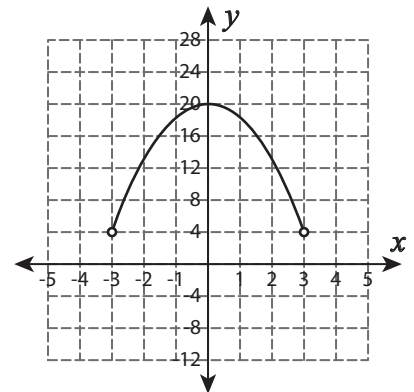
Domain : _____

Range : _____

2)



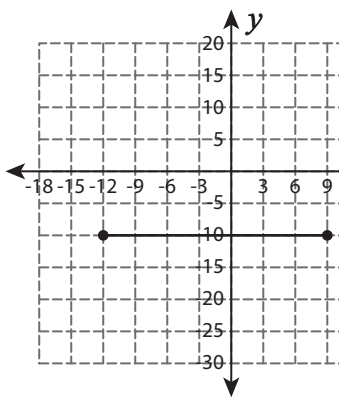
3)



Domain : _____

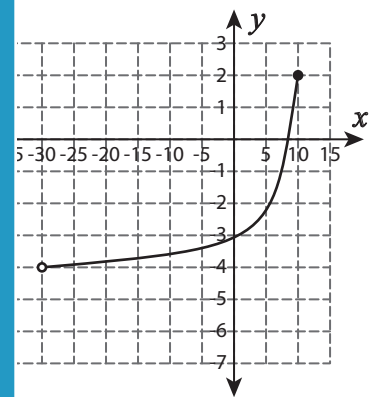
Range : _____

4)



Domain : _____

Range : _____



Domain : _____

Range : _____

PREVIEW

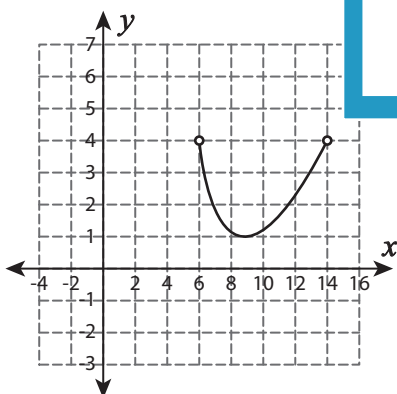
Gain complete access to the largest collection of worksheets in all subjects!

Members, please log in to download this worksheet.

Not a member? Please sign up to gain complete access.

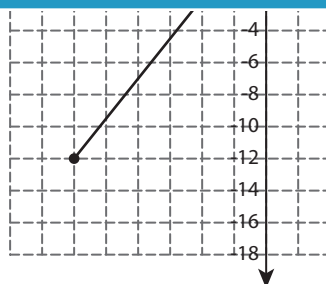
www.mathworksheets4kids.com

7)



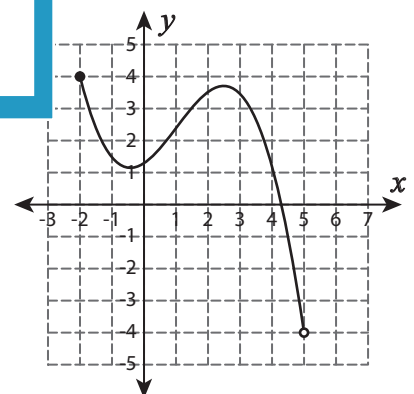
Domain : _____

Range : _____



Domain : _____

Range : _____



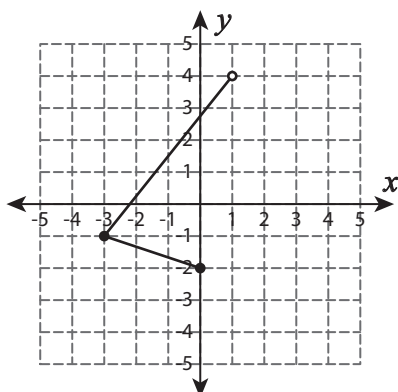
Domain : _____

Range : _____

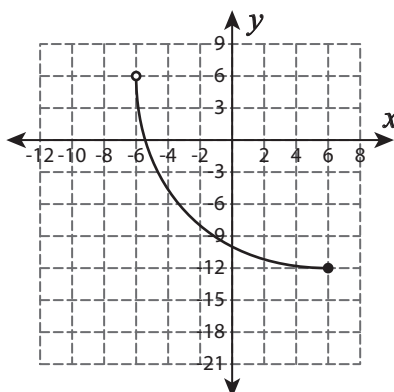
Domain and Range - Graph

Find the domain and range of each graph.

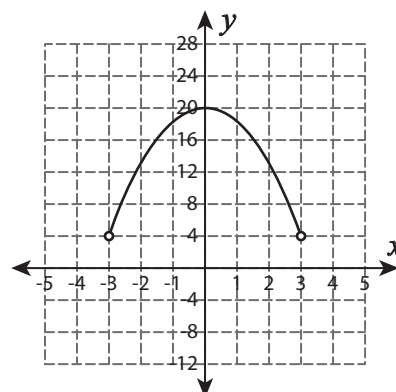
1)

Domain : [-3, 1]Range : [-2, 4]

2)



3)

Domain : (-3, 3)Range : (4, 20]

PREVIEW

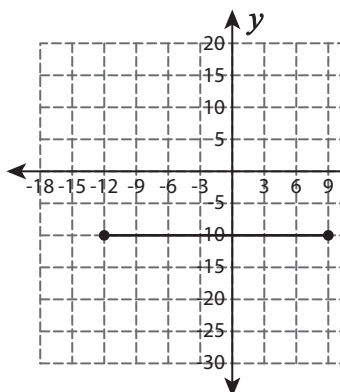
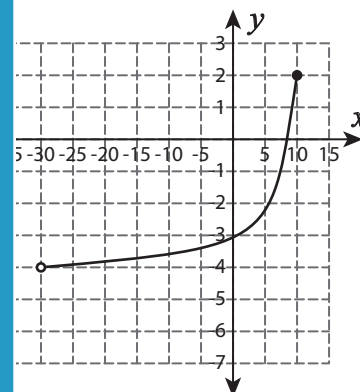
Gain complete access to the largest collection of worksheets in all subjects!

Members, please log in to download this worksheet.

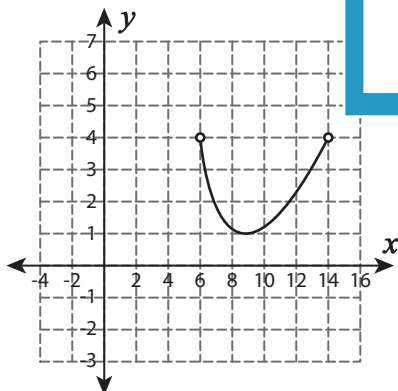
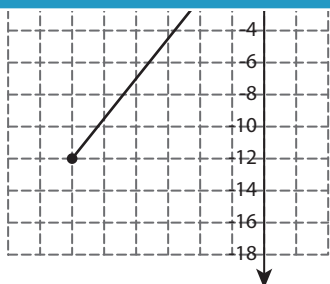
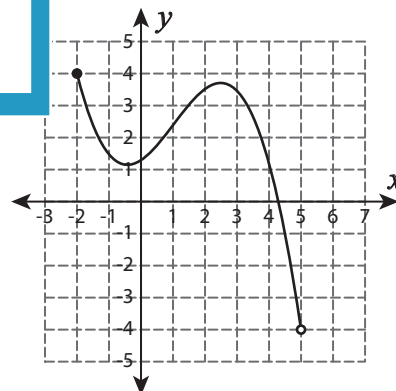
Not a member? Please sign up to gain complete access.

www.mathworksheets4kids.com

4)

Domain : [-12, 9]Range : {-10}Domain : (-30, 10]Range : (-4, 2]

7)

Domain : (6, 14)Range : [1, 4)Domain : [-24, -8]Range : [-12, -2]Domain : [-2, 5)Range : (-4, 4]