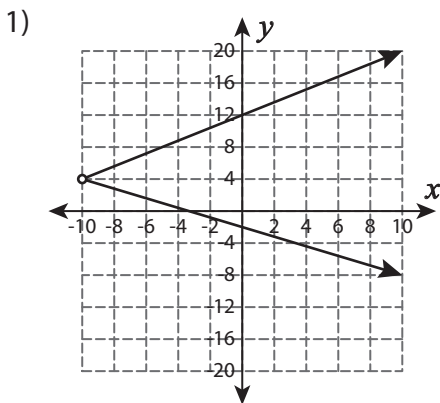


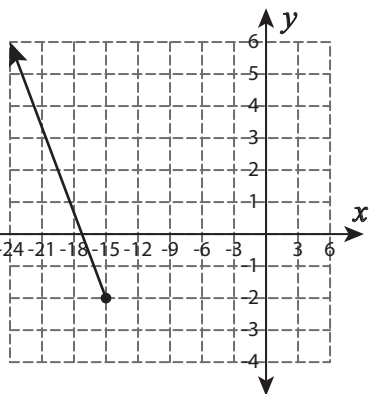
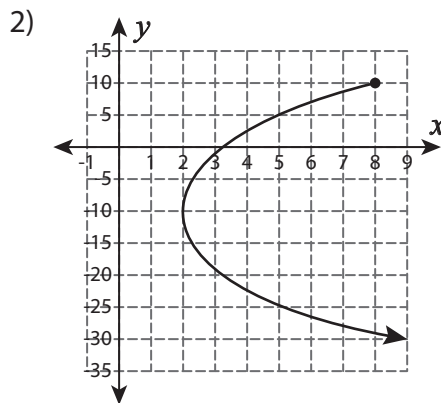
Domain and Range - Graph

Find the domain and range of each graph.



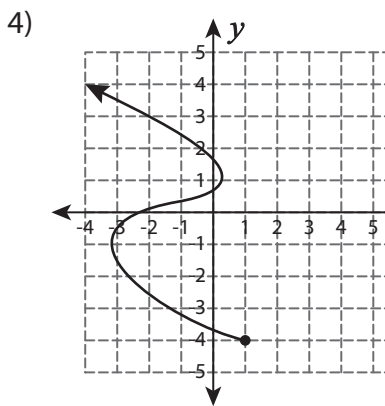
Domain : _____

Range : _____



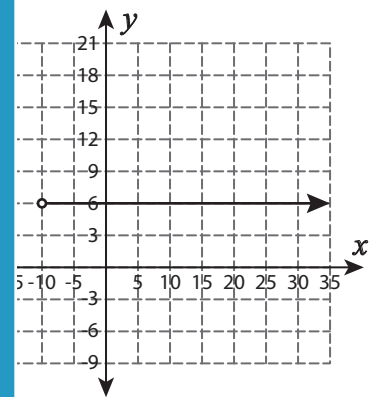
Domain : _____

Range : _____



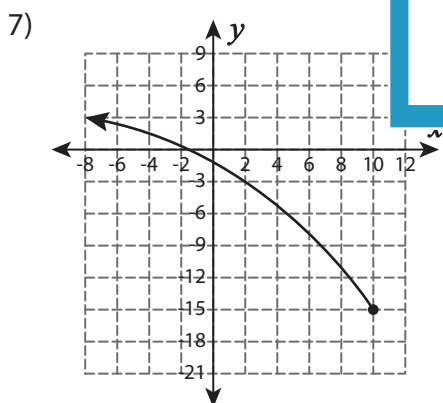
Domain : _____

Range : _____



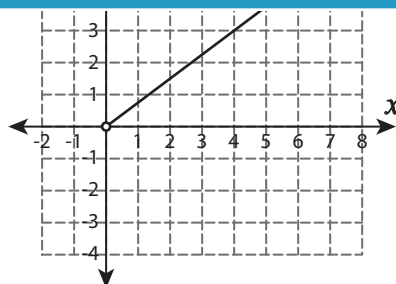
Domain : _____

Range : _____



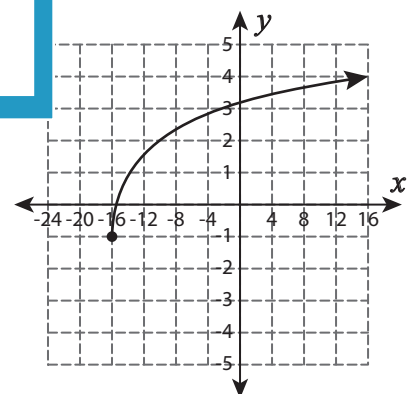
Domain : _____

Range : _____



Domain : _____

Range : _____



Domain : _____

Range : _____

PREVIEW

Gain complete access to the largest collection of worksheets in all subjects!

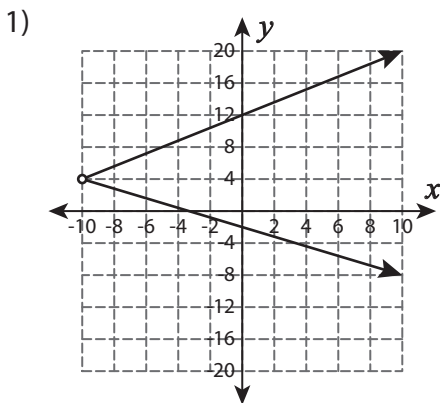
Members, please log in to download this worksheet.

Not a member? Please sign up to gain complete access.

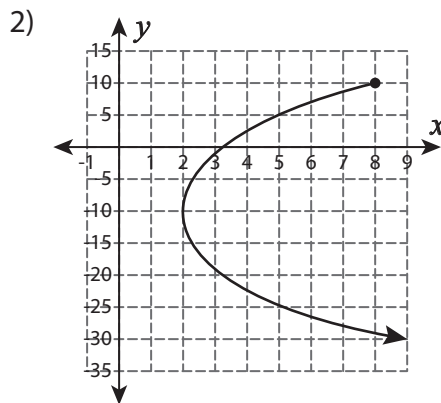
www.mathworksheets4kids.com

Domain and Range - Graph

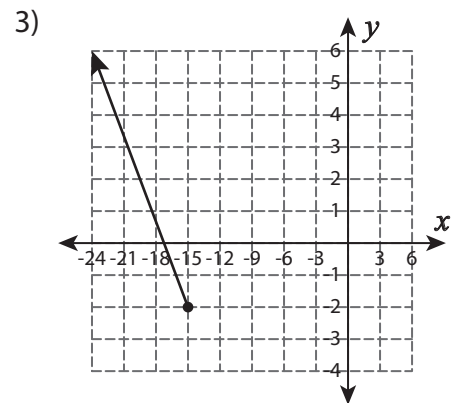
Find the domain and range of each graph.



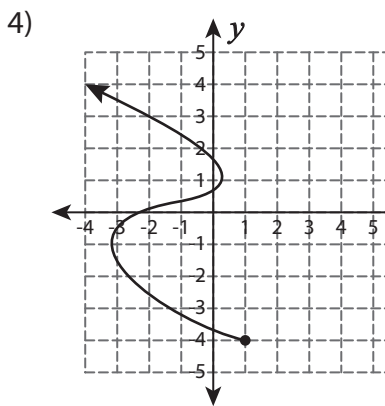
Domain : $(-10, \infty)$
 Range : $(-\infty, \infty)$



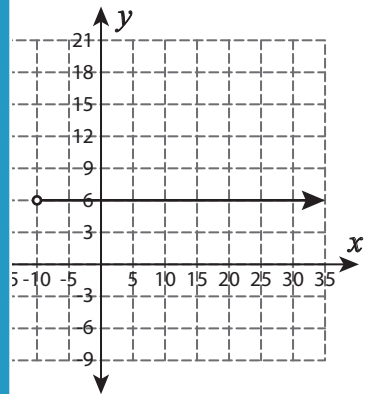
Domain : $(-\infty, -15]$
 Range : $[-2, \infty)$



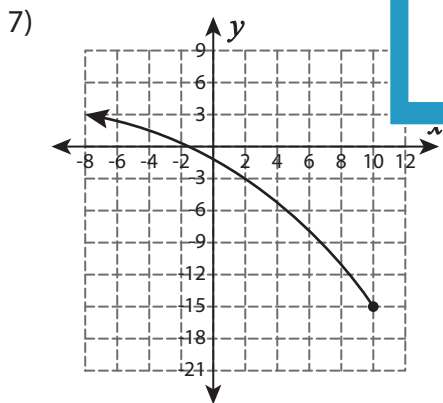
Domain : $(-\infty, -15]$
 Range : $[-2, \infty)$



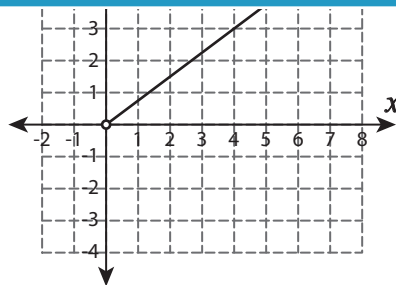
Domain : $(-\infty, 1]$
 Range : $[-4, \infty)$



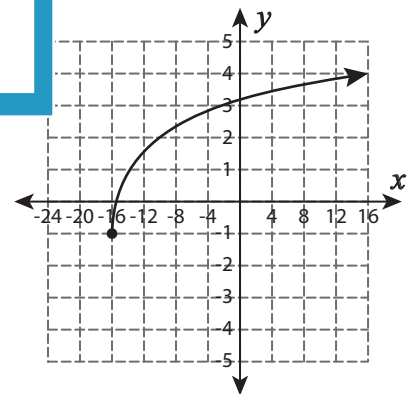
Domain : $(-10, \infty)$
 Range : $\{6\}$



Domain : $(-\infty, 10]$
 Range : $[-15, \infty)$



Domain : $(0, \infty)$
 Range : $(0, \infty)$



Domain : $[-16, \infty)$
 Range : $(-1, \infty)$

PREVIEW

Gain complete access to the largest collection of worksheets in all subjects!

Members, please log in to download this worksheet.

Not a member? Please sign up to gain complete access.

www.mathworksheets4kids.com