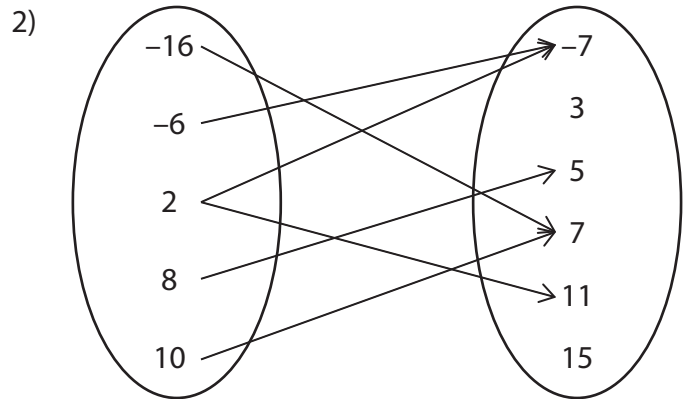
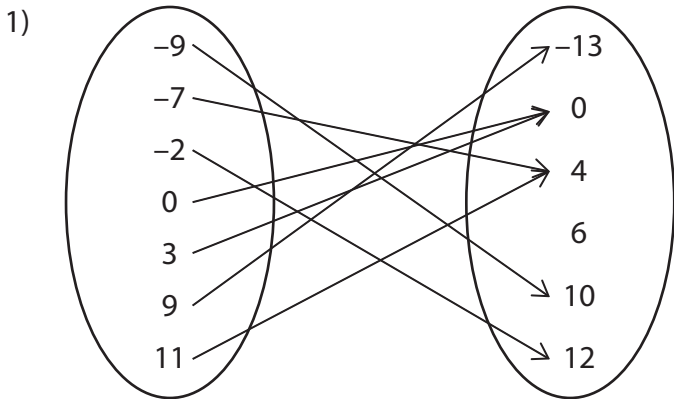


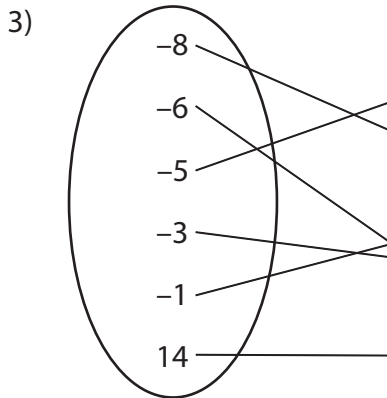
# Domain and Range - Mapping

Find the domain and range of each relation.



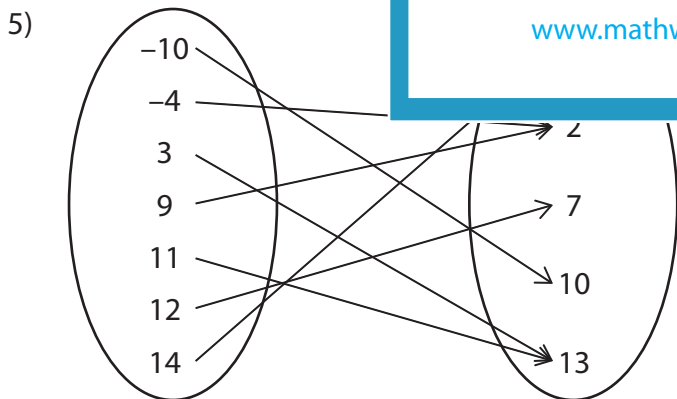
Domain : \_\_\_\_\_

Range : \_\_\_\_\_



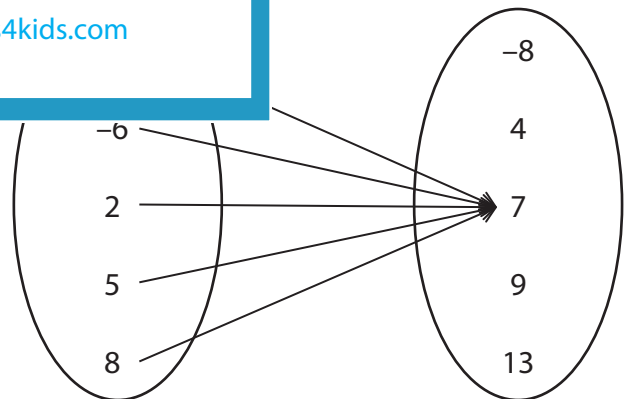
Domain : \_\_\_\_\_

Range : \_\_\_\_\_



Domain : \_\_\_\_\_

Range : \_\_\_\_\_



Domain : \_\_\_\_\_

Range : \_\_\_\_\_

## PREVIEW

Gain complete access to the largest collection of worksheets in all subjects!

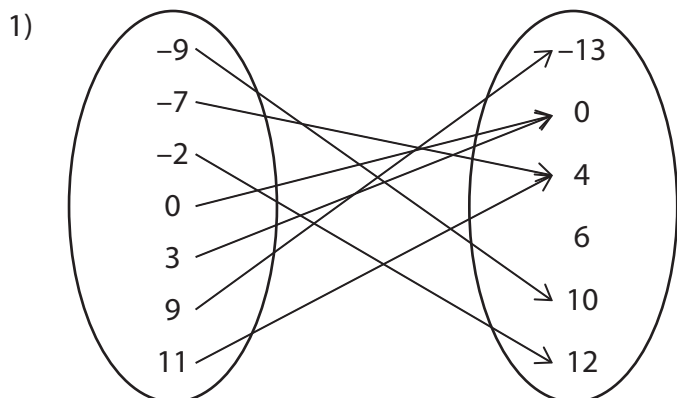
Members, please log in to download this worksheet.

Not a member? Please sign up to gain complete access.

[www.mathworksheets4kids.com](http://www.mathworksheets4kids.com)

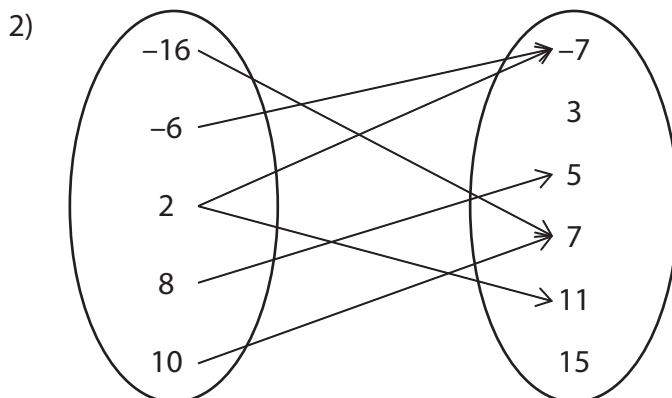
# Domain and Range - Mapping

Find the domain and range of each relation.



Domain :     {-9, -7, -2, 0, 3, 9, 11}    

Range :     {-13, 0, 4, 6, 10, 12}    



Domain :     {-16, -6, 2, 8, 10}    

Range :     {-7, 3, 5, 7, 11, 15}    



Domain :     {-8, -6, -5, -3, -1, 14}    

Range :     {-1, 2, 3, 5, 8, 9}    

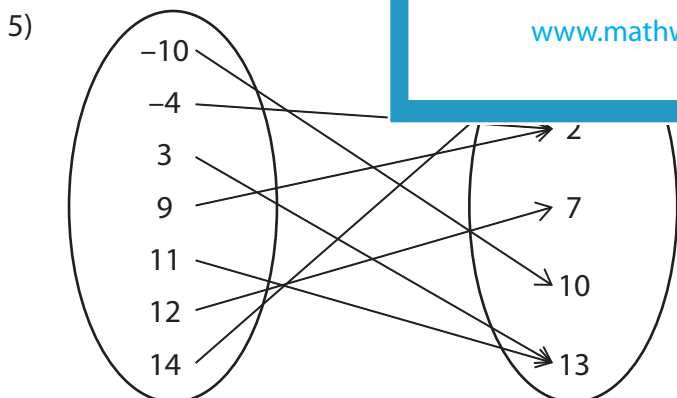
## PREVIEW

Gain complete access to the largest collection of worksheets in all subjects!

Members, please log in to download this worksheet.

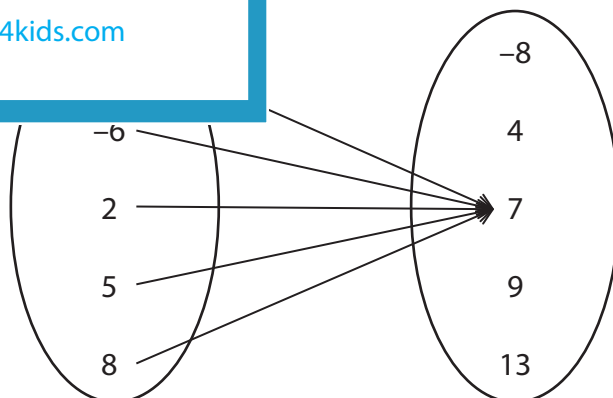
Not a member? Please sign up to gain complete access.

[www.mathworksheets4kids.com](http://www.mathworksheets4kids.com)



Domain :     {-10, -4, 3, 9, 11, 12, 14}    

Range :     {-1, 2, 7, 10, 13}    



Domain :     {-6, 2, 5, 8}    

Range :     {7}