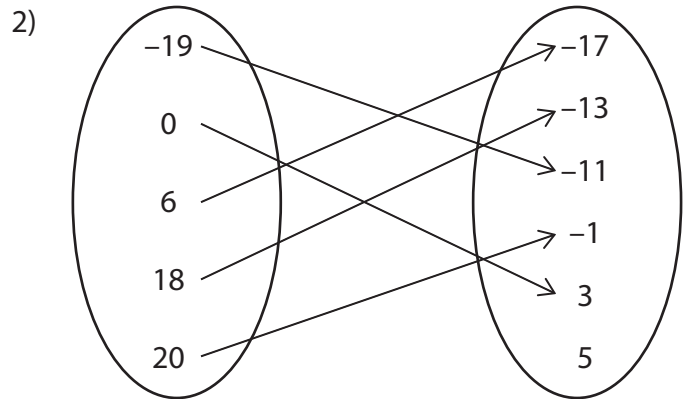
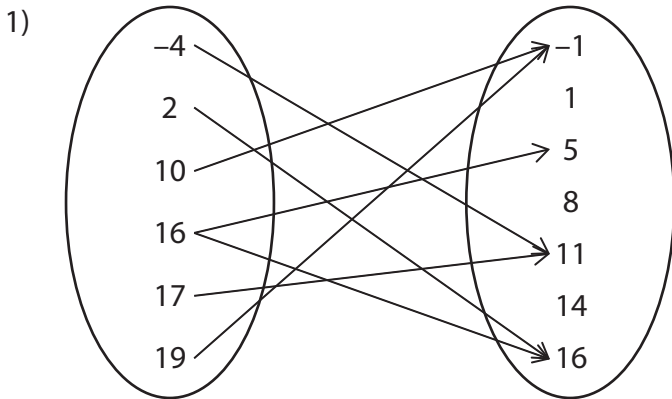


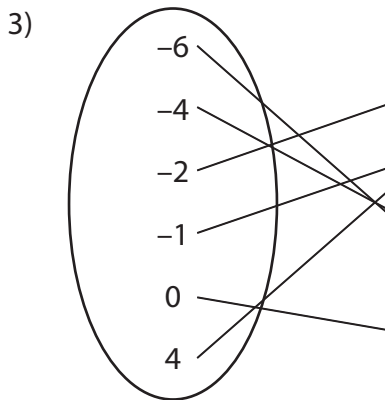
Domain and Range - Mapping

Find the domain and range of each relation.



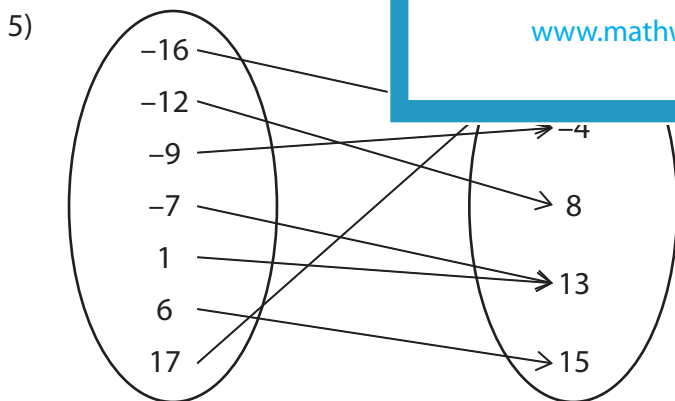
Domain : _____

Range : _____



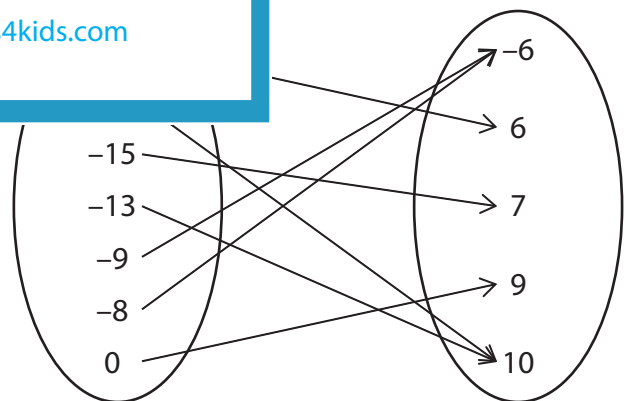
Domain : _____

Range : _____



Domain : _____

Range : _____



Domain : _____

Range : _____

PREVIEW

Gain complete access to the largest collection of worksheets in all subjects!

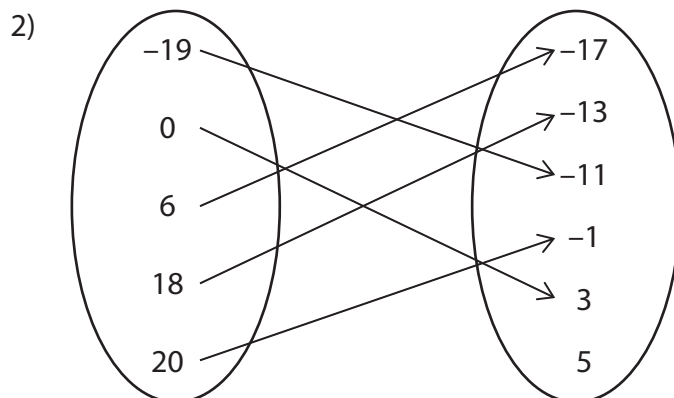
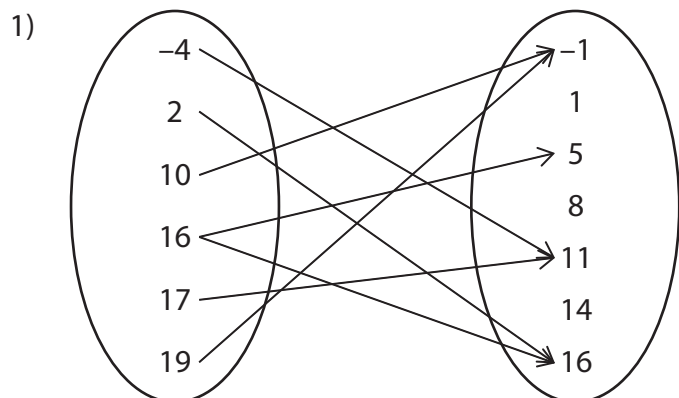
Members, please log in to download this worksheet.

Not a member? Please sign up to gain complete access.

www.mathworksheets4kids.com

Domain and Range - Mapping

Find the domain and range of each relation.

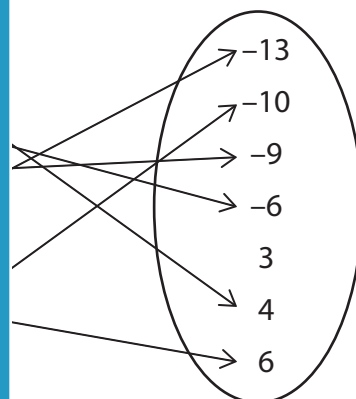
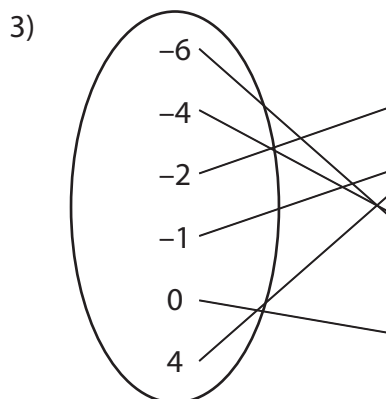


Domain : {-4, 2,

 -19, 0, 6, 18, 20}

Range : {-1

 17, -13, -11, -1, 3}

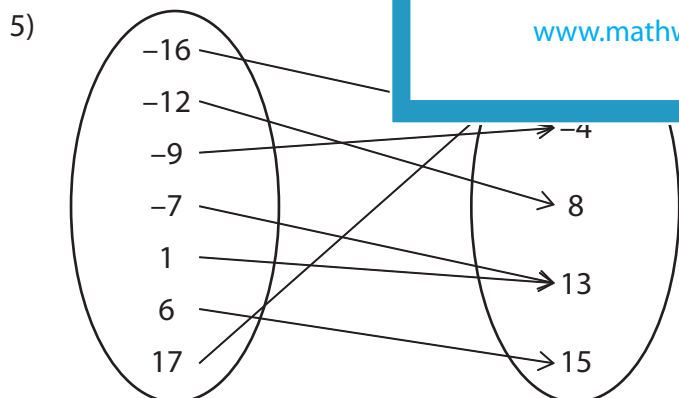


Domain : {-6, -4,

 2, 3, 5, 7, 11, 13}

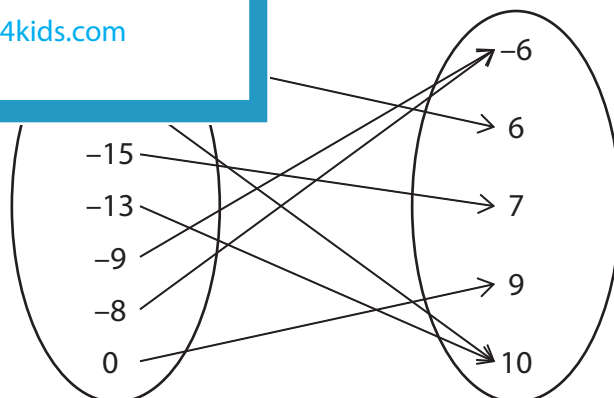
Range : {-15,

 3, -10, -9, -6, 4, 6}



Domain : {-16, -12, -9, -7, 1, 6, 17}

Range : {-6, -4, 8, 13, 15}



Domain : {-19, -17, -15, -13, -9, -8, 0}

Range : {-6, 6, 7, 9, 10}

PREVIEW

Gain complete access to the largest collection of worksheets in all subjects!

Members, please log in to download this worksheet.

Not a member? Please sign up to gain complete access.

www.mathworksheets4kids.com