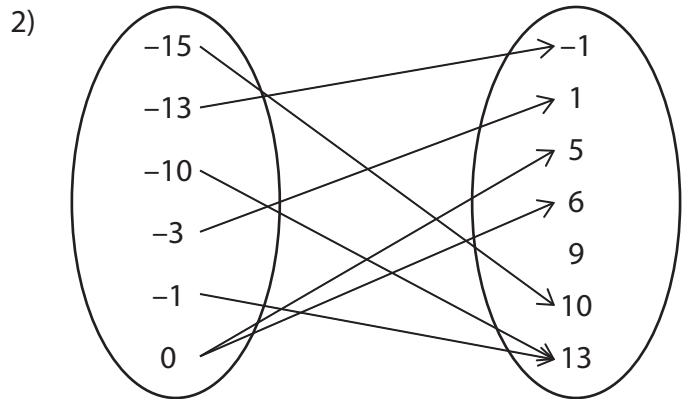
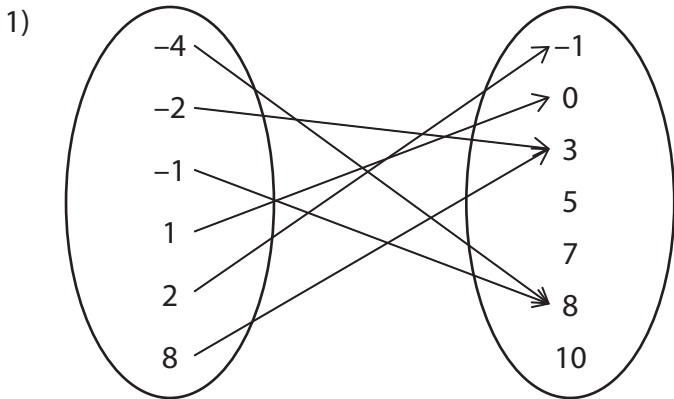


# Domain and Range - Mapping

Find the domain and range of each relation.



Domain : \_\_\_\_\_

Range : \_\_\_\_\_

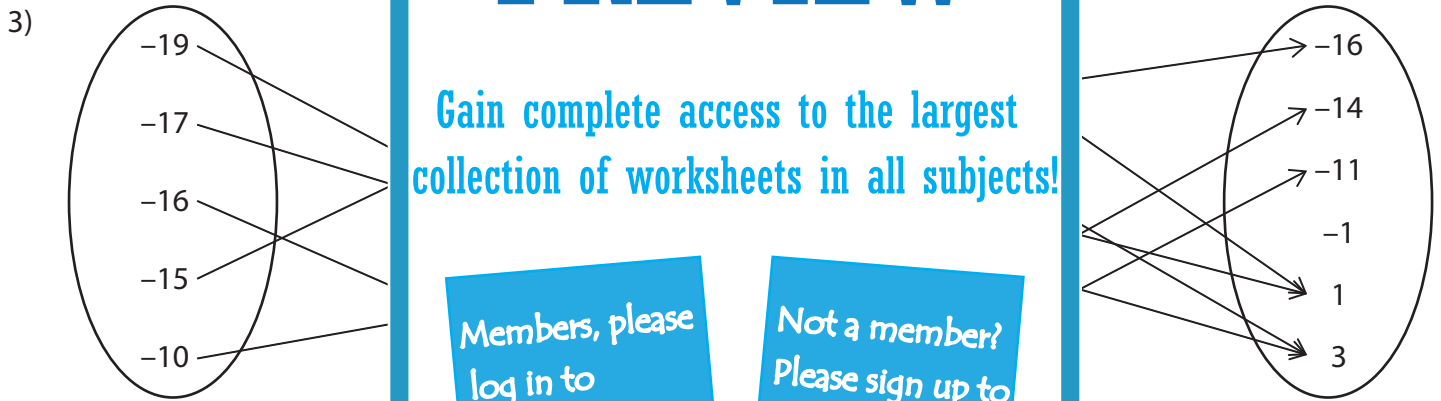
# PREVIEW

Gain complete access to the largest collection of worksheets in all subjects!

Members, please log in to download this worksheet.

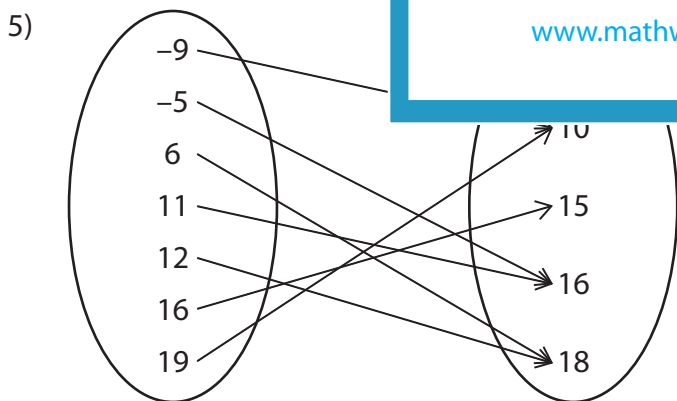
Not a member? Please sign up to gain complete access.

[www.mathworksheets4kids.com](http://www.mathworksheets4kids.com)



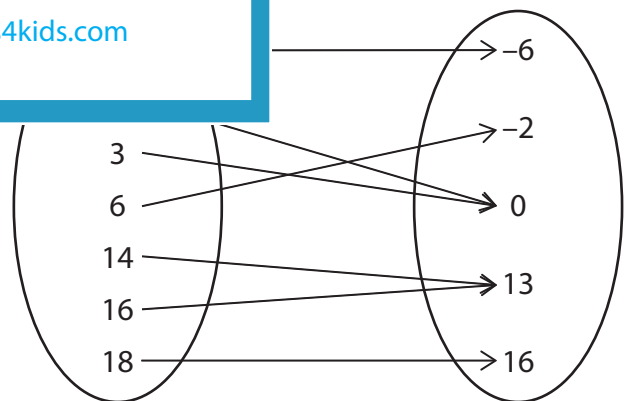
Domain : \_\_\_\_\_

Range : \_\_\_\_\_



Domain : \_\_\_\_\_

Range : \_\_\_\_\_

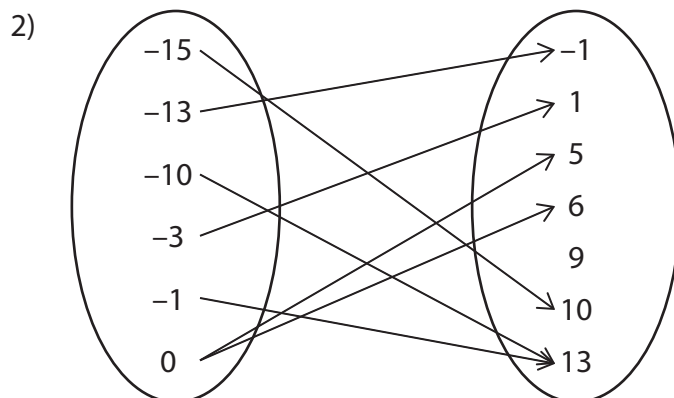
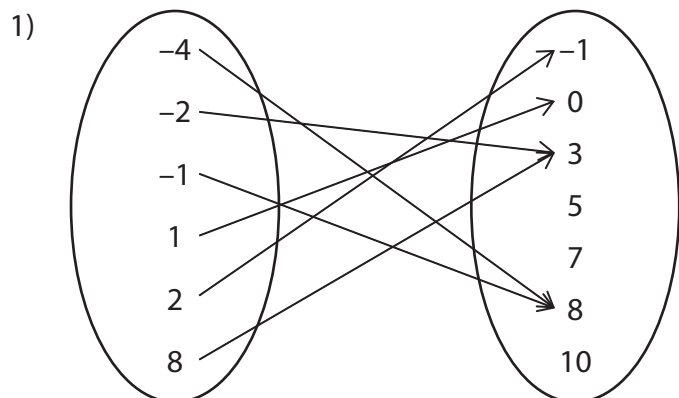


Domain : \_\_\_\_\_

Range : \_\_\_\_\_

# Domain and Range - Mapping

Find the domain and range of each relation.

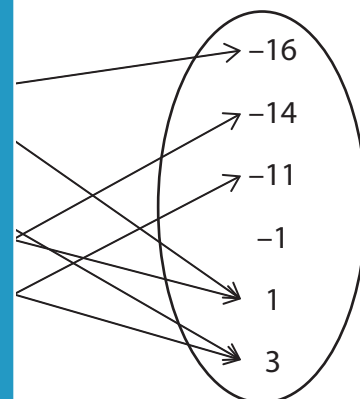
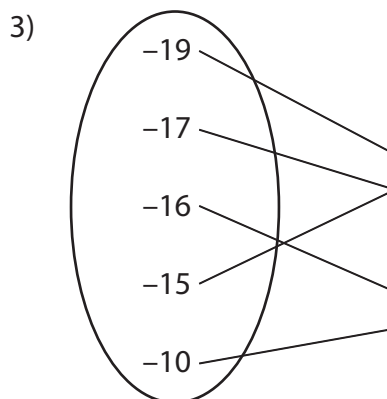


Domain :            **$\{-4, -$**

           **$, -13, -10, -3, -1, 0\}$**

Range :            **$\{-$**

           **$-1, 1, 5, 6, 10, 13\}$**

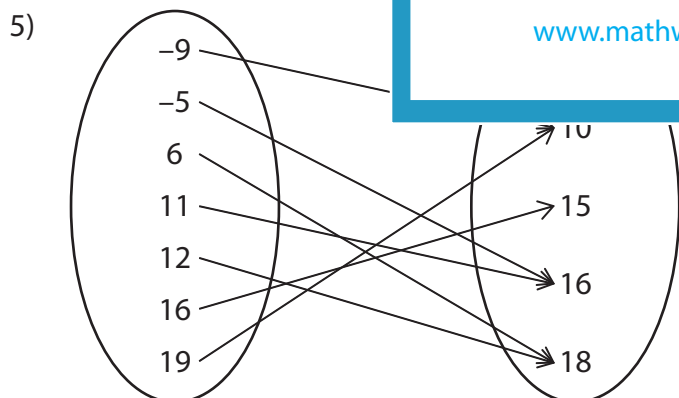


Domain :            **$\{-19, -17$**

           **$, -16, -14, -11, -1, 1, 3\}$**

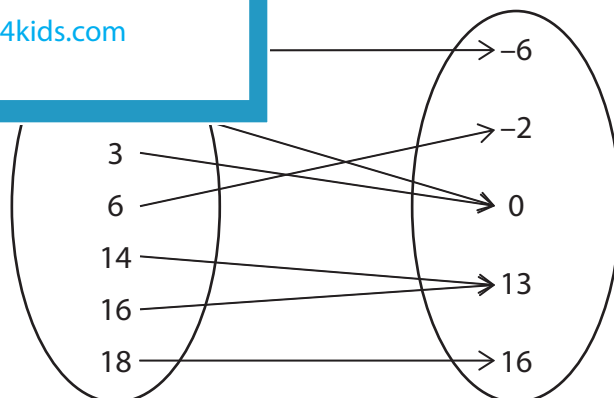
Range :            **$\{14,$**

           **$-16, -14, -11, 1, 3\}$**



Domain :            **$\{-9, -5, 6, 11, 12, 16, 19\}$**

Range :            **$\{10, 15, 16, 18\}$**



Domain :            **$\{-6, -3, 3, 6, 14, 16, 18\}$**

Range :            **$\{-6, -2, 0, 13, 16\}$**

## PREVIEW

Gain complete access to the largest collection of worksheets in all subjects!

Members, please log in to download this worksheet.

Not a member? Please sign up to gain complete access.

[www.mathworksheets4kids.com](http://www.mathworksheets4kids.com)