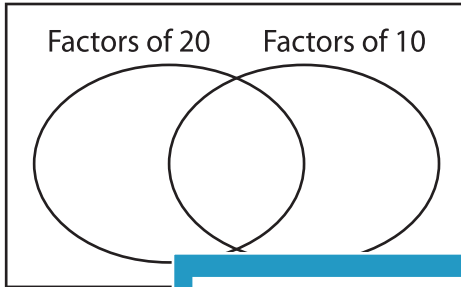


GCF - Venn Diagram

Find the greatest common factor for each pair of numbers using Venn diagram.

1) 20, 10

a) Complete the venn diagram.

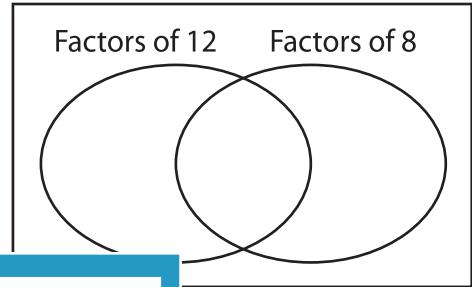


b) Common factors are _____

c) $GCF(20, 10) =$ _____

2) 12, 8

a) Complete the venn diagram.



b) Common factors are _____

c) _____

3) 24, 16

a) Complete the



b) Common factors are _____

c) $GCF(24, 16) =$ _____

PREVIEW
Gain complete access to the largest collection of worksheets in all subjects!

Members, please log in to download this worksheet.

Not a member? Please sign up to gain complete access.

www.mathworksheets4kids.com

venn diagram.

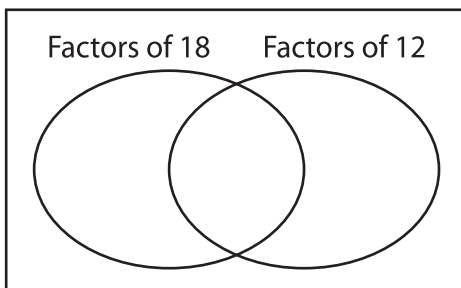
Factors of 10 Factors of 15

b) Common factors are _____

c) _____

5) 18, 12

a) Complete the



b) Common factors are _____

c) $GCF(18, 12) =$ _____

venn diagram.

Factors of 20 Factors of 24

b) Common factors are _____

c) $GCF(20, 24) =$ _____