

Name : _____

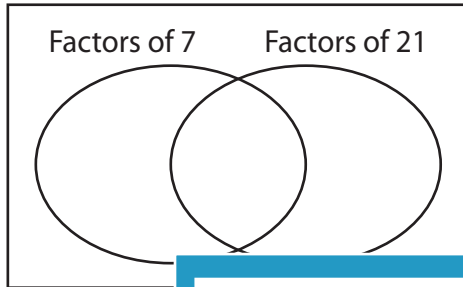
GCF - Venn Diagram

ES4

Find the greatest common factor for each pair of numbers using Venn diagram.

1) 7, 21

a) Complete the venn diagram.

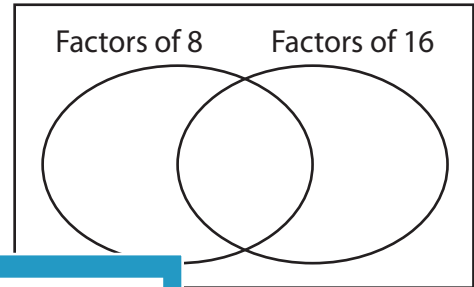


b) Common factors are _____

c) $GCF(7, 21) =$ _____

2) 8, 16

a) Complete the venn diagram.



b) Common factors are _____

c) _____

3) 15, 9

a) Complete the



b) Common factors are _____

c) $GCF(15, 9) =$ _____

Gain complete access to the largest collection of worksheets in all subjects!

Members, please log in to download this worksheet.

Not a member? Please sign up to gain complete access.

www.mathworksheets4kids.com

venn diagram.

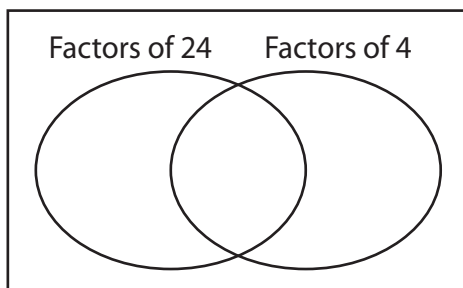
Factors of 12 Factors of 14

b) Common factors are _____

c) _____

5) 24, 4

a) Complete the



b) Common factors are _____

c) $GCF(24, 4) =$ _____

venn diagram.

Factors of 6 Factors of 3

b) Common factors are _____

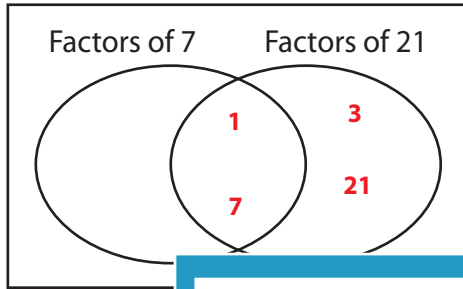
c) $GCF(6, 3) =$ _____

GCF - Venn Diagram

Find the greatest common factor for each pair of numbers using Venn diagram.

1) 7, 21

a) Complete the venn diagram.

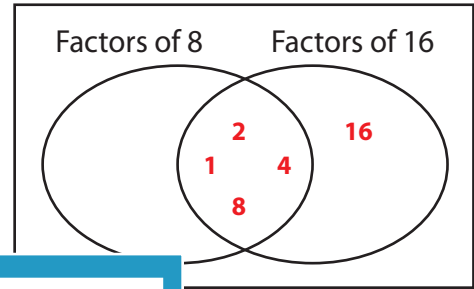


b) Common factors are _____

c) $GCF(7, 21) =$ _____

2) 8, 16

a) Complete the venn diagram.

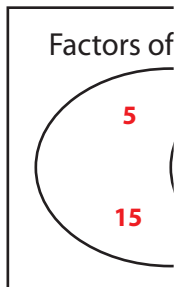


b) Common factors are 1, 2, 4, 8

c) 8

3) 15, 9

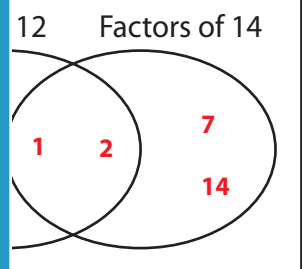
a) Complete the venn diagram.



b) Common factors are _____

c) $GCF(15, 9) =$ _____

b) Common factors are _____

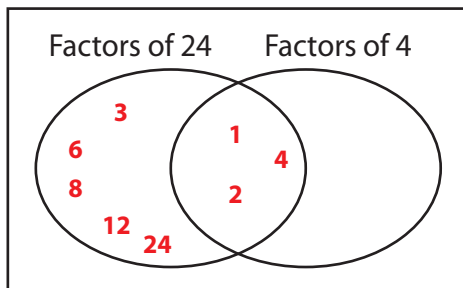


b) Common factors are 1, 2

c) 2

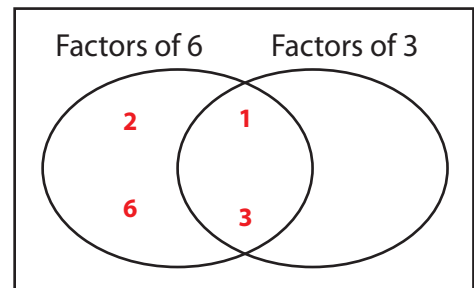
5) 24, 4

a) Complete the venn diagram.



b) Common factors are 1, 2, 4

c) $GCF(24, 4) =$ 4



b) Common factors are 1, 3

c) $GCF(6, 3) =$ 3

PREVIEW

Gain complete access to the largest collection of worksheets in all subjects!

Members, please log in to download this worksheet.

Not a member? Please sign up to gain complete access.

www.mathworksheets4kids.com