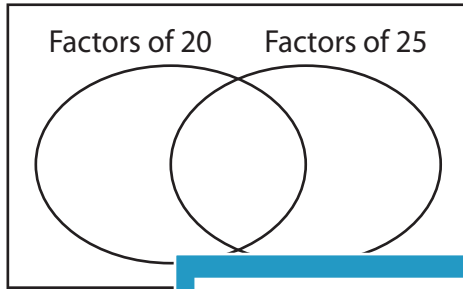


GCF - Venn Diagram

Find the greatest common factor for each pair of numbers using Venn diagram.

1) 20, 25

a) Complete the venn diagram.

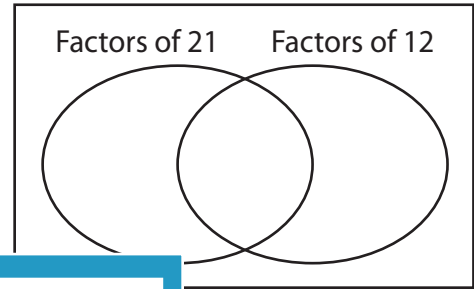


b) Common factors are _____

c) $GCF(20, 25) =$ _____

2) 21, 12

a) Complete the venn diagram.



b) Common factors are _____

c) _____

3) 8, 24

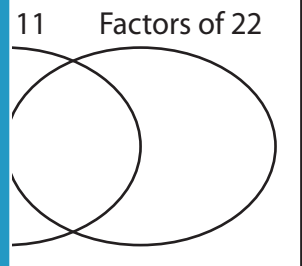
a) Complete the



b) Common factors are _____

c) $GCF(8, 24) =$ _____

venn diagram.

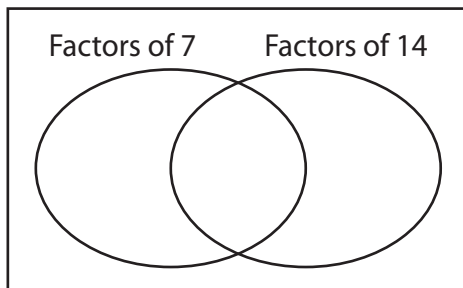


b) Common factors are _____

c) _____

5) 7, 14

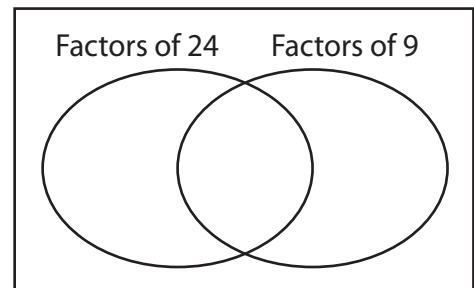
a) Complete the



b) Common factors are _____

c) $GCF(7, 14) =$ _____

venn diagram.



b) Common factors are _____

c) $GCF(24, 9) =$ _____

PREVIEW

Gain complete access to the largest collection of worksheets in all subjects!

Members, please log in to download this worksheet.

Not a member? Please sign up to gain complete access.

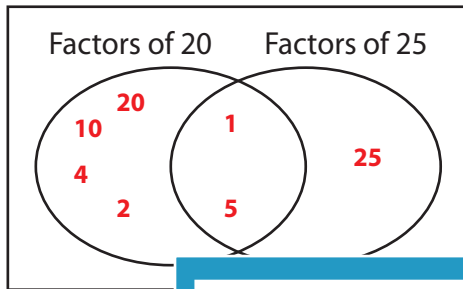
www.mathworksheets4kids.com

GCF - Venn Diagram

Find the greatest common factor for each pair of numbers using Venn diagram.

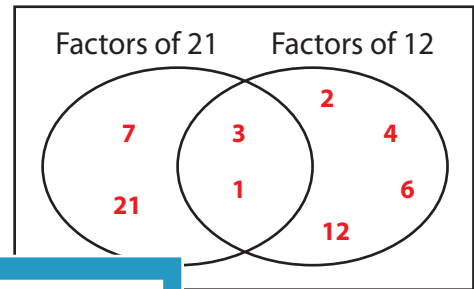
1) 20, 25

a) Complete the venn diagram.



2) 21, 12

a) Complete the venn diagram.



b) Common factors are 1, 3

c) $GCF(20, 25) =$ 5

b) Common factors are 1, 3

c) $GCF(21, 12) =$ 3

3) 8, 24

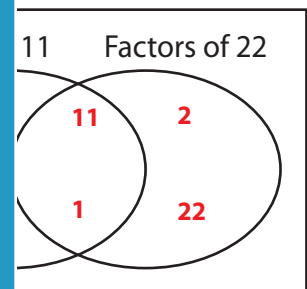
a) Complete the venn diagram.



b) Common factors are 1, 2

c) $GCF(8, 24) =$ 8

a) Complete the venn diagram.

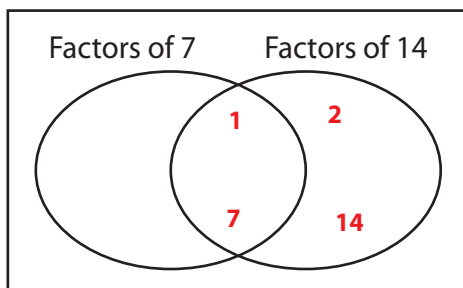


b) Common factors are 1, 11

c) $GCF(11, 22) =$ 11

5) 7, 14

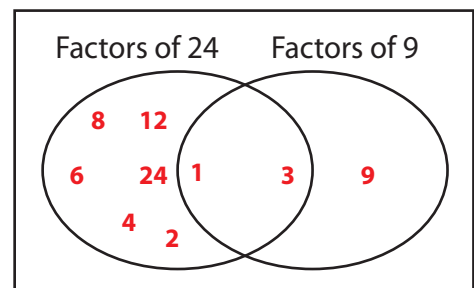
a) Complete the venn diagram.



b) Common factors are 1, 7

c) $GCF(7, 14) =$ 7

a) Complete the venn diagram.



b) Common factors are 1, 3

c) $GCF(24, 9) =$ 3

PREVIEW

Gain complete access to the largest collection of worksheets in all subjects!

Members, please log in to download this worksheet.

Not a member? Please sign up to gain complete access.

www.mathworksheets4kids.com