

Name : _____

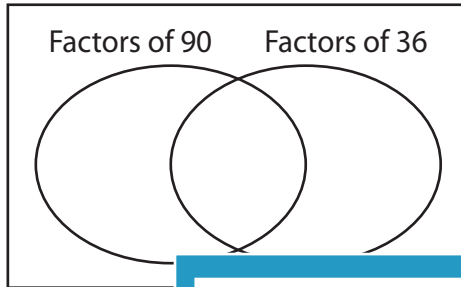
GCF - Venn Diagram

MS4

Find the greatest common factor for each pair of numbers using Venn diagram.

1) 90, 36

a) Complete the venn diagram.

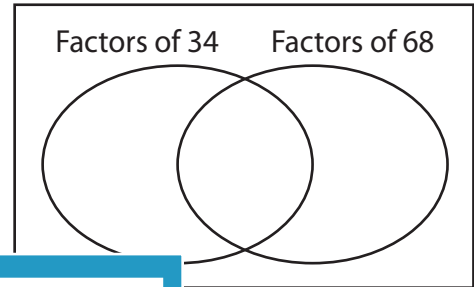


b) Common factors are _____

c) $GCF(90, 36) =$ _____

2) 34, 68

a) Complete the venn diagram.



b) Common factors are _____

c) _____

3) 64, 48

a) Complete the



b) Common factors are _____

c) $GCF(64, 48) =$ _____

Gain complete access to the largest collection of worksheets in all subjects!

Members, please log in to download this worksheet.

Not a member? Please sign up to gain complete access.

www.mathworksheets4kids.com

venn diagram.

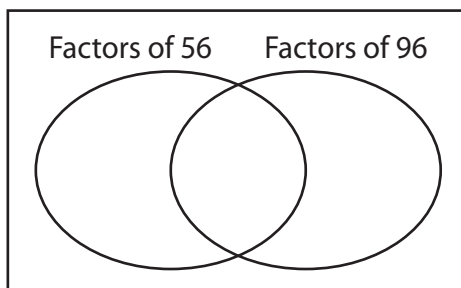
Factors of 35 Factors of 65

b) Common factors are _____

c) _____

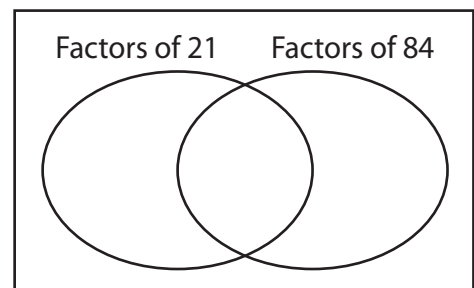
5) 56, 96

a) Complete the



b) Common factors are _____

c) $GCF(56, 96) =$ _____



b) Common factors are _____

c) $GCF(21, 84) =$ _____

Name : _____

Answer key

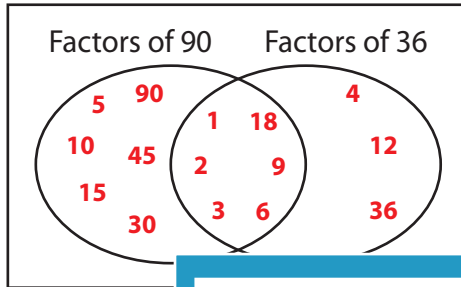
GCF - Venn Diagram

MS4

Find the greatest common factor for each pair of numbers using Venn diagram.

1) 90, 36

a) Complete the venn diagram.

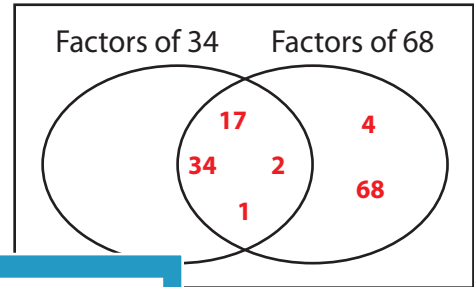


b) Common factors are _____

c) $GCF(90, 36) =$ _____

2) 34, 68

a) Complete the venn diagram.

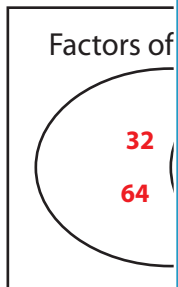


b) Common factors are 1, 2, 17, 34

c) $GCF(34, 68) =$ 34

3) 64, 48

a) Complete the venn diagram.



b) Common factors are _____

c) $GCF(64, 48) =$ _____

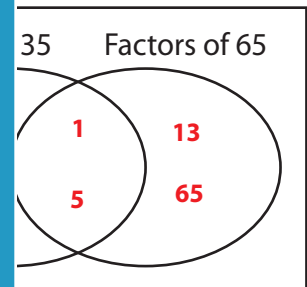
Gain complete access to the largest collection of worksheets in all subjects!

Members, please log in to download this worksheet.

Not a member? Please sign up to gain complete access.

www.mathworksheets4kids.com

b) Common factors are _____

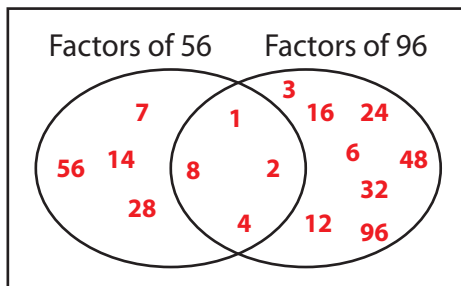


b) Common factors are 1, 5

c) $GCF(35, 65) =$ 5

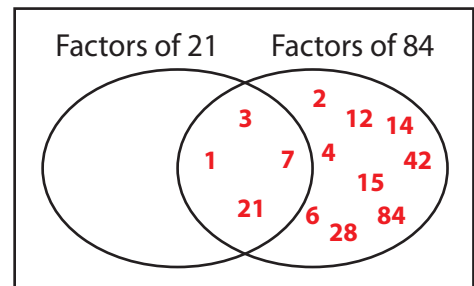
5) 56, 96

a) Complete the venn diagram.



b) Common factors are 1, 2, 4, 8

c) $GCF(56, 96) =$ 8



b) Common factors are 1, 3, 7, 21

c) $GCF(21, 84) =$ 21