



## Comparing Dice

Count the pips on each pair of dice. Compare using  $>$ ,  $<$ , or  $=$ .

1)   \_\_\_\_\_  

2)   \_\_\_\_\_  

3)  \_\_\_\_\_ 

4)  \_\_\_\_\_ 

5)  \_\_\_\_\_ 

6)   \_\_\_\_\_  

7)   \_\_\_\_\_  

# PREVIEW

Gain complete access to the largest  
collection of worksheets in all subjects!

Members, please  
log in to  
download this  
worksheet.




Not a member?  
Please sign up to  
gain complete  
access.

[www.mathworksheets4kids.com](http://www.mathworksheets4kids.com)

Name : \_\_\_\_\_

# Comparing Dice

Count the pips on each pair of dice. Compare using  $>$ ,  $<$ , or  $=$ .

1)             $>$            

2)             $=$            

3)  

4)  

5)  

6)             $=$            

7)             $>$            

**PREVIEW**

Gain complete access to the largest collection of worksheets in all subjects!

Members, please log in to download this worksheet.

Not a member? Please sign up to gain complete access.

[www.mathworksheets4kids.com](http://www.mathworksheets4kids.com)