




Comparing Dice

Count the pips on each pair of dice. Compare using $>$, $<$, or $=$.

1)   _____  

2)   _____  

3)  _____ 

4)  _____ 

5)  _____ 

6)   _____  

7)   _____  

PREVIEW

Gain complete access to the largest collection of worksheets in all subjects!

Members, please log in to download this worksheet.





Not a member? Please sign up to gain complete access.

www.mathworksheets4kids.com

Name : _____

Comparing Dice

Count the pips on each pair of dice. Compare using $>$, $<$, or $=$.

1)   $=$  

2)   $<$  

3)  

4)  

5)  

6)   $<$  

7)   $=$  

PREVIEW

Gain complete access to the largest collection of worksheets in all subjects!

Members, please log in to download this worksheet.

Not a member? Please sign up to gain complete access.

www.mathworksheets4kids.com