


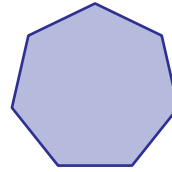
Name : \_\_\_\_\_

# Comparing Sides and Corners

1)



Number of corners: \_\_\_\_\_



Number of corners: \_\_\_\_\_

Which shape has more corners? a) octagon b) heptagon

2)



Number of



s: \_\_\_\_\_

Which shape has fe

triangle

3)



Number of co



s: \_\_\_\_\_

Which shape has few

pentagon

4)



Number of




s: \_\_\_\_\_

Which shape has more sides?


a) heptagon

b) trapeziod

5)



Number of corners: \_\_\_\_\_



Number of corners: \_\_\_\_\_

Which shape has fewer corners?

a) hexagon

b) kite

**PREVIEW**

Gain complete access to the largest collection of worksheets in all subjects!

Members, please log in to download this worksheet.

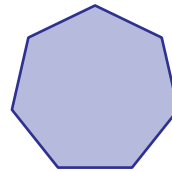

Not a member? Please sign up to gain complete access.

[www.mathworksheets4kids.com](http://www.mathworksheets4kids.com)

Name : \_\_\_\_\_

# Comparing Sides and Corners

1)



Number of corners: 8

Number of corners: 7

Which shape has more corners?  a) octagon

b) heptagon

2)



Number of

s: 3

Which shape has fe

triangle

3)



Number of co

s: 5

Which shape has few

pentagon

4)





Number of

s: 4

Which shape has more sides?  a) heptagon

b) trapeziod

5)



Number of corners: 6

Number of corners: 4

Which shape has fewer corners?  a) hexagon

b) kite

**PREVIEW**

Gain complete access to the largest collection of worksheets in all subjects!

Members, please log in to download this worksheet.

Not a member? Please sign up to gain complete access.

[www.mathworksheets4kids.com](http://www.mathworksheets4kids.com)