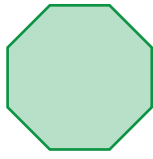


Name : \_\_\_\_\_

## Comparing Sides and Corners

1)



Number of sides: \_\_\_\_\_



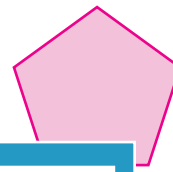
Number of sides: \_\_\_\_\_

Which shape has fewer sides? a) octagon b) parallelogram

2)



Number of corners: \_\_\_\_\_



Number of sides: \_\_\_\_\_

Which shape has more corners? a) heptagon b) pentagon

3)



Number of sides: \_\_\_\_\_



Number of corners: \_\_\_\_\_

Which shape has more corners? a) rectangle b) triangle

4)



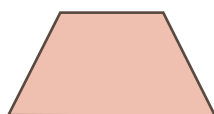
Number of corners: \_\_\_\_\_



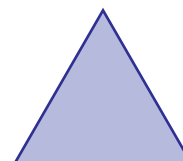
Number of sides: \_\_\_\_\_

Which shape has fewer corners? a) pentagon b) kite

5)



Number of sides: \_\_\_\_\_



Number of sides: \_\_\_\_\_

Which shape has more sides? a) trapezoid b) triangle

**PREVIEW**

Gain complete access to the largest collection of worksheets in all subjects!

Members, please log in to download this worksheet.

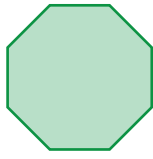
Not a member? Please sign up to gain complete access.

[www.mathworksheets4kids.com](http://www.mathworksheets4kids.com)

Name : \_\_\_\_\_

# Comparing Sides and Corners

1)



Number of sides: 8



Number of sides: 4

Which shape has fewer sides? a) octagon  b)  parallelogram

2)



Number of corners: \_\_\_\_\_



Number of sides: 5

Which shape has more corners? a) heptagon  b)  pentagon

3)



Number of sides: \_\_\_\_\_



Number of sides: 6

Which shape has more sides? a) rectangle  b)  hexagon

4)



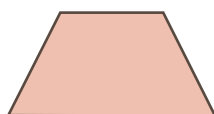
Number of corners: \_\_\_\_\_



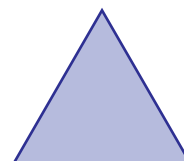
Number of sides: 4

Which shape has fewer corners? a) octagon  b)  kite

5)



Number of sides: 4



Number of sides: 3

Which shape has more sides? a)  trapezoid b)  triangle

**PREVIEW**

Gain complete access to the largest collection of worksheets in all subjects!

Members, please log in to download this worksheet.

Not a member? Please sign up to gain complete access.

[www.mathworksheets4kids.com](http://www.mathworksheets4kids.com)