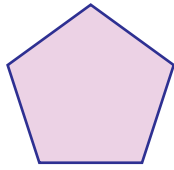


Name : _____

Comparing Sides and Corners

1)



Number of corners: _____



Number of corners: _____

Which shape has fewer corners? a) pentagon b) rectangle

2)



Number of

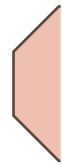


s: _____

Which shape has r

parallelogram

3)



Number of



s: _____

Which shape has fe

triangle

4)




Number of co




s: _____

Which shape has more corners? a) heptagon b) kite

5)



Number of sides: _____



Number of sides: _____

Which shape has fewer sides? a) pentagon b) heptagon

PREVIEW

Gain complete access to the largest collection of worksheets in all subjects!

Members, please log in to download this worksheet.

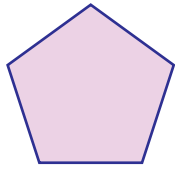
Not a member? Please sign up to gain complete access.

www.mathworksheets4kids.com

Name : _____

Comparing Sides and Corners

1)



Number of corners: 5

Number of corners: 4

Which shape has fewer corners? a) pentagon b) rectangle

2)




Number of

sides: 4

Which shape has r

parallelogram

3)



Number of

sides: 3

Which shape has fe

triangle

4)





Number of co

corners: 4

Which shape has more corners? a) heptagon b) kite

5)



Number of sides: 5

Number of sides: 7

Which shape has fewer sides? a) pentagon b) heptagon

PREVIEW

Gain complete access to the largest collection of worksheets in all subjects!

Members, please log in to download this worksheet.

Not a member? Please sign up to gain complete access.

www.mathworksheets4kids.com