

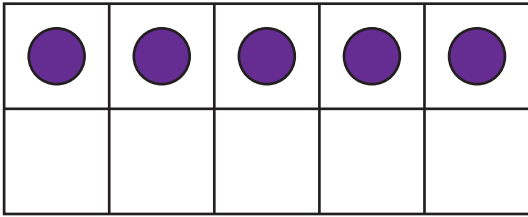
Name : \_\_\_\_\_

## Comparing Ten Frames

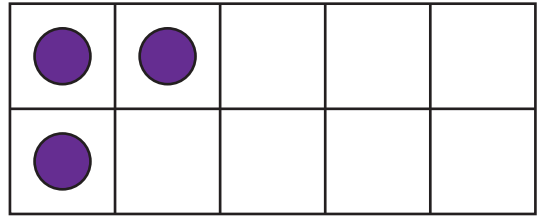
Sheet 1

Compare the counters on each pair of ten frames using  $>$ ,  $<$ , or  $=$ .

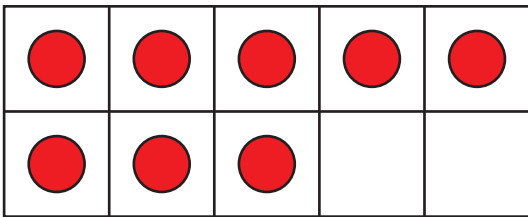
1)



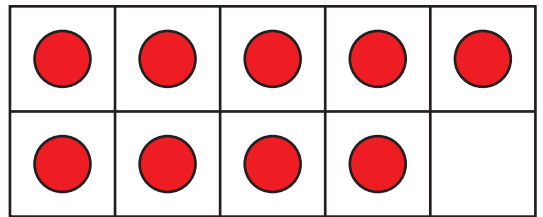
\_\_\_\_\_



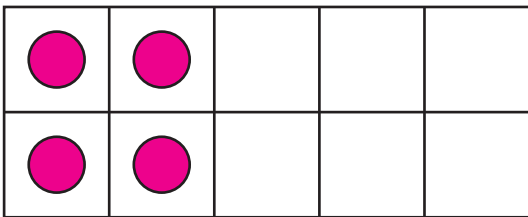
2)



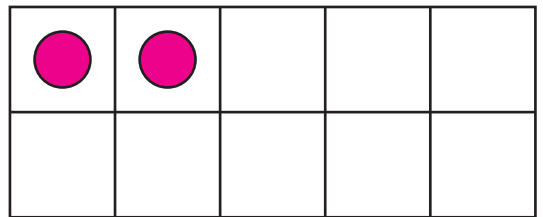
\_\_\_\_\_



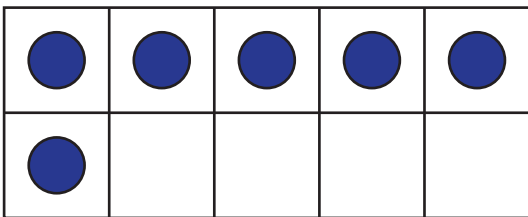
3)



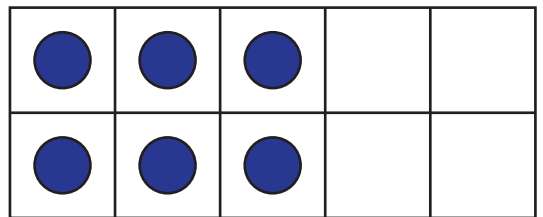
\_\_\_\_\_



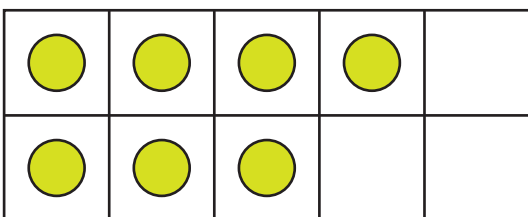
4)



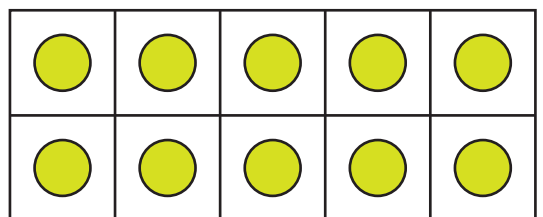
\_\_\_\_\_



5)



\_\_\_\_\_



Name : \_\_\_\_\_

# Comparing Ten Frames

Compare the counters on each pair of ten frames using  $>$ ,  $<$ , or  $=$ .

1)

●	●	●	●	●

$>$

●	●			
●				

2)

●	●	●	●	●
●	●	●		

$<$

●	●	●	●	●
●	●	●	●	

3)

●	●			
●	●			

$>$

●	●			

4)

●	●	●	●	●
●				

$=$

●	●	●		
●	●	●		

5)

●	●	●	●	
●	●	●		

$<$

●	●	●	●	●
●	●	●	●	●