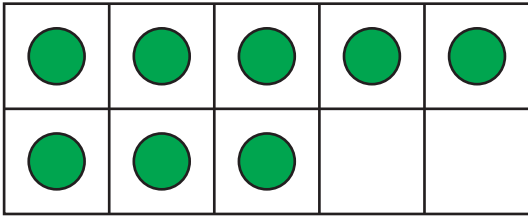


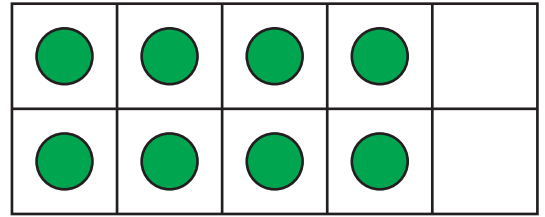
# Comparing Ten Frames

Compare the counters on each pair of ten frames using  $>$ ,  $<$ , or  $=$ .

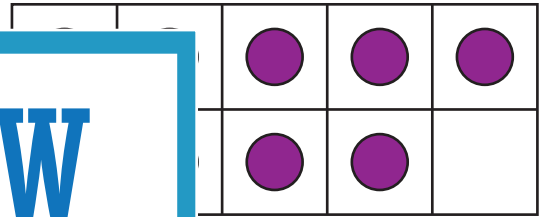
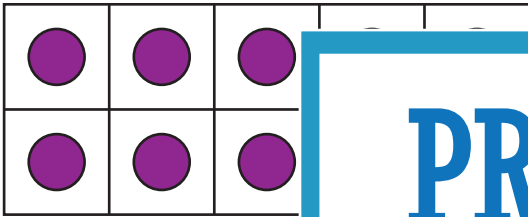
1)



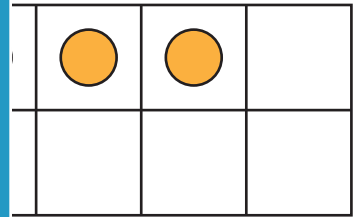
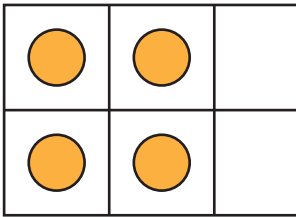
\_\_\_\_\_



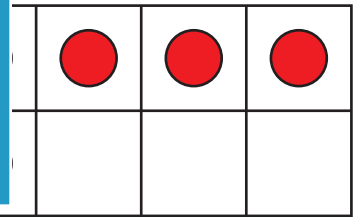
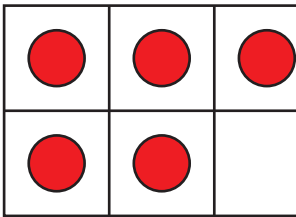
2)



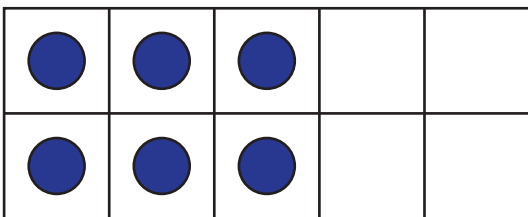
3)



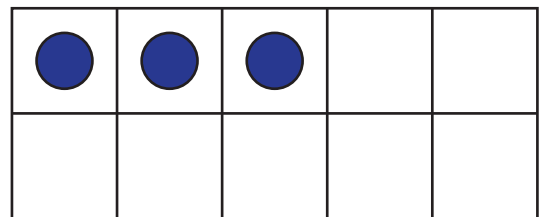
4)



5)



\_\_\_\_\_



## PREVIEW

Gain complete access to the largest  
collection of worksheets in all subjects!

Members, please  
log in to  
download this  
worksheet.

Not a member?  
Please sign up to  
gain complete  
access.

www.mathworksheets4kids.com

Name : \_\_\_\_\_

# Comparing Ten Frames

Compare the counters on each pair of ten frames using  $>$ ,  $<$ , or  $=$ .

1)

●	●	●	●	●
●	●	●		

$=$

●	●	●	●	
●	●	●	●	

2)

●	●	●		
●	●	●		

●	●	●		
●	●			

3)

●	●	
●	●	

●	●	

4)

●	●	●
●	●	

●	●	●

5)

●	●	●		
●	●	●		

$>$

●	●	●		

## PREVIEW

Gain complete access to the largest collection of worksheets in all subjects!

Members, please log in to download this worksheet.

Not a member? Please sign up to gain complete access.

www.mathworksheets4kids.com