


Name : _____


One-half, One-third, and One-fourth

1) a) Check the fraction strip representing the fraction $\frac{1}{2}$.




b) How many halves make a whole?

2) a) Check the fraction strip representing the fraction $\frac{1}{3}$.



b) How many thirds make a whole?

3) a) Check the fraction strip representing the fraction $\frac{1}{4}$.



b) How many fourths make a whole?

PREVIEW

Gain complete access to the largest collection of worksheets in all subjects!

Members, please log in to download this worksheet.

Not a member? Please sign up to gain complete access.


www.mathworksheets4kids.com

Name : _____

Answer Key

One-half, One-third, and One-fourth

1) a) Check the fraction strip representing the fraction $\frac{1}{2}$.



b) How many halves make a whole?

2

2) a) Check the fra




PREVIEW
Gain complete access to the largest collection of worksheets in all subjects!

Members, please log in to download this worksheet.

Not a member? Please sign up to gain complete access.

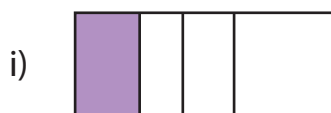
www.mathworksheets4kids.com



b) How many th

3

3) a) Check the fra



b) How many fourths make a whole?

4