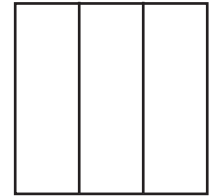


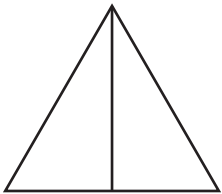
Name : _____

Halves, Thirds, and Quarters

Match each shape to the fraction it represents.



• Halves •

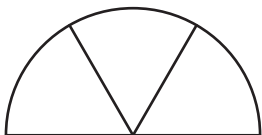
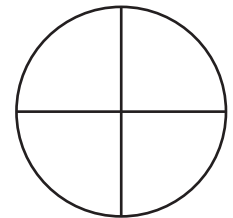


PREVIEW
Gain complete access to the largest
collection of worksheets in all subjects!


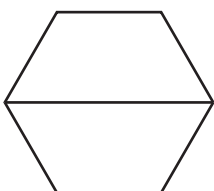
Members, please
log in to
download this
worksheet.

Not a member?
Please sign up to
gain complete
access.

www.mathworksheets4kids.com



• Quarters •

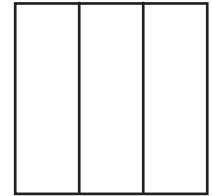


Name : _____

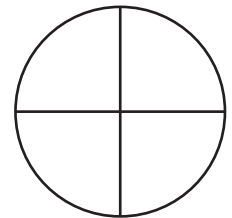
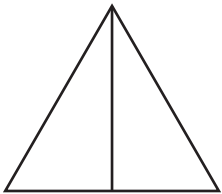
Answer Key

Halves, Thirds, and Quarters

Match each shape to the fraction it represents.



Halves



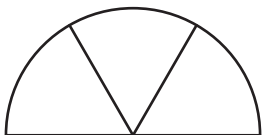
PREVIEW

Gain complete access to the largest collection of worksheets in all subjects!

Members, please log in to download this worksheet.

Not a member? Please sign up to gain complete access.

www.mathworksheets4kids.com



Quarters

