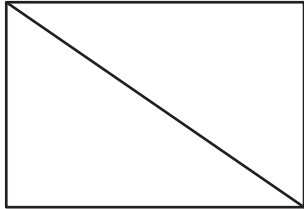


Name : _____

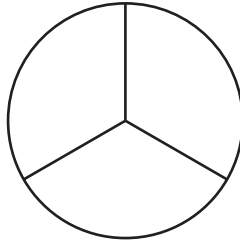
Halves, Thirds, or Fourths

Write whether each of the following shapes is divided into halves, thirds, or fourths.

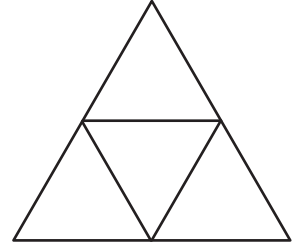
1)



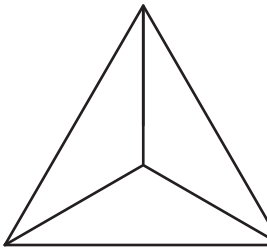
2)



3)



4)




PREVIEW
Gain complete access to the largest collection of worksheets in all subjects!


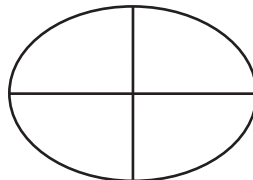
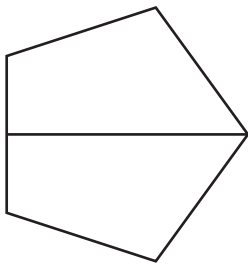
Members, please log in to download this worksheet.

Not a member? Please sign up to gain complete access.

www.mathworksheets4kids.com



7)



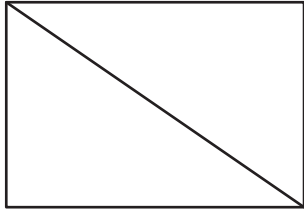
Name : _____

Answer Key

Halves, Thirds, or Fourths

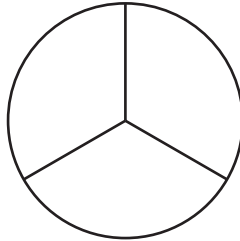
Write whether each of the following shapes is divided into halves, thirds, or fourths.

1)



Halves

2)



PREVIEW

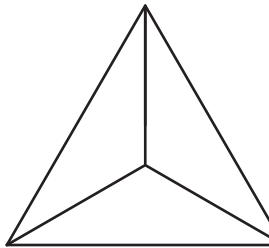
Gain complete access to the largest collection of worksheets in all subjects!

Members, please log in to download this worksheet.

Not a member? Please sign up to gain complete access.

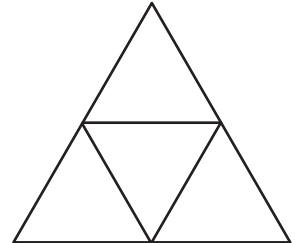
www.mathworksheets4kids.com

4)



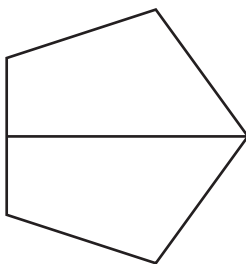
Thirds

3)

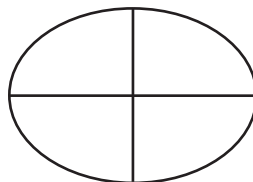


Fourths


7)



Halves



Fourths



Thirds