

Name : _____

Heavy vs Light

Sheet 1


Tick the correct choice that best describes the weight of each object.

1)




Heavy Light

2)



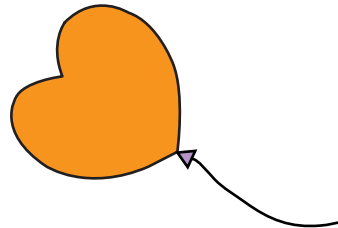
Heavy Light

3)



Heavy Light

4)




Heavy Light

5)



Heavy Light

6)



Heavy Light