

Name : _____

Heavy vs Light

Sheet 3

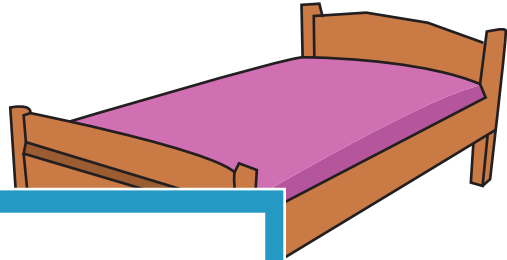
Tick the correct choice that best describes the weight of each object.

1)




Heavy

2)



Light

3)



Heavy

Gain complete access to the largest collection of worksheets in all subjects!

Members, please log in to download this worksheet.

Not a member? Please sign up to gain complete access.

www.mathworksheets4kids.com

Light

5)



Heavy Light



Heavy Light

Heavy vs Light

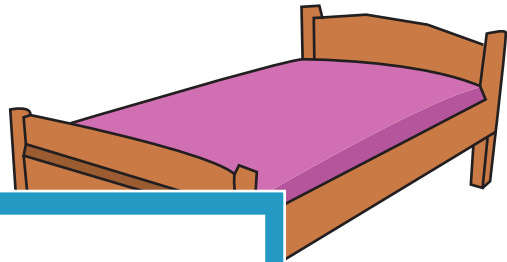
Tick the correct choice that best describes the weight of each object.

1)




Heavy

2)



Light

3)



Heavy

Gain complete access to the largest collection of worksheets in all subjects!


Members, please log in to download this worksheet.

Not a member? Please sign up to gain complete access.


www.mathworksheets4kids.com

Light

5)



Heavy Light



Heavy Light