

Name : _____

Heavy vs Light

Sheet 5

Tick the correct choice that best describes the weight of each object.

1)




Heavy

2)




Light

3)



Heavy



Light

5)



Heavy Light



Heavy Light

PREVIEW

Gain complete access to the largest collection of worksheets in all subjects!

Members, please log in to download this worksheet.

Not a member? Please sign up to gain complete access.

www.mathworksheets4kids.com

Heavy vs Light


Sheet 5

Tick the correct choice that best describes the weight of each object.


1)

 Heavy

2)

 Light

3)

 Heavy

PREVIEW

Gain complete access to the largest collection of worksheets in all subjects!

Members, please log in to download this worksheet.

Not a member? Please sign up to gain complete access.

www.mathworksheets4kids.com

 Light

5)

 Heavy Light Heavy Light