


Name : _____

Heavy vs Light

1) Circle the heaviest object.




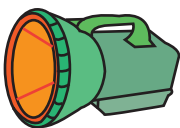
2) Circle the lightest object.



3) Circle the heaviest object.



4) Circle the lightest object.



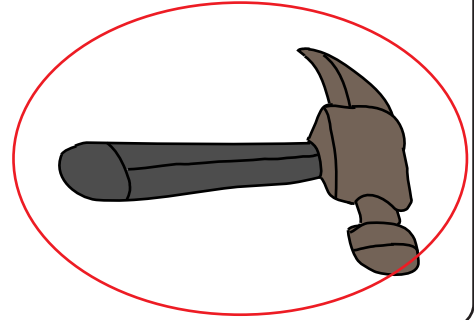
Name : _____

Answer Key


Sheet 1

Heavy vs Light


1) Circle the heaviest object.



2) Circle the lightest object.



3) Circle the heaviest object.



4) Circle the lightest object.

